

**MOTHERCARE PREPARATORY SCHOOLS**  
**END OF FIRST MONTH ASSESSMENT - 2021**  
**P.5 SOCIAL STUDIES WITH RELIGIOUS EDUCATION**


**Name:** \_\_\_\_\_

**Branch:** \_\_\_\_\_

**SECTION A**

1. Give any one reason why a pilot should use a compass.  
\_\_\_\_\_
2. Why is a shelter known as a basic need?  
\_\_\_\_\_
3. State any one role played by National Environment Management Authority (NEMA).  
\_\_\_\_\_
4. Mention any one activity done by farmers during the rainy season.  
\_\_\_\_\_
5. How is Port Mombasa economically important to Kenya?  
\_\_\_\_\_
6. What term is used to mean the steep sides of a rift valley?  
\_\_\_\_\_
7. Why should people wear gumboots during rainy weather?  
\_\_\_\_\_
8. Give any one function of a wind vane at a weather station.  
\_\_\_\_\_
9. How is Uganda different from Tanzania in terms of their location?  
\_\_\_\_\_
10. Write U.W.A in full.  
\_\_\_\_\_
11. Which type of rainfall is received in mountainous areas?  
\_\_\_\_\_

12. How is the road sign below important to road users?



---

13. Mention any one social service provided by the government to its people in your community.

---

14. Which discovery helped early man to start sleeping in caves?

---

15. Mention any one importance of Lake Victoria to crop farmers around it.

---

16. Which body is responsible for protecting natural forests in Uganda?

---


17. How can citizens help the police to keep law and order?

---

18. Give the reason why there are few people that use air transport in Uganda.

---

19. What is the compass direction of town A from B ?





20. Why is Uganda divided into districts?

---

21. What title is given to the head of the police force in Uganda?

---

22. Name the tool used to regulate the flow of activities in a classroom.
- 
23. In which district is Uganda's International Airport found?
- 
24. Write the legend told by the people of Northern Uganda.
- 
25. What is migration?
- 
26. Give any one importance of building a fence around the school.
- 
27.  How useful was the tool shown in the diagram to Early man?
- 
28. Mention any one raw material for craft industry got from swamps.
- 
29. Why do people practice economic activities?
- 
30. Write any one symbol of a school.
- 
31. What does the map symbol below represent?
- 
- 
32. Who heads all civil servants in a district?
- 
33. Mention any one lake in Uganda that is crossed by the Equator.
- 
34. Mention one problem faced by people living in mountainous areas.
- 
35. What is a plateau?
-

For questions 36-40, answer either Christianity or Islam but not both.

36. **Either:**

Why do we remember Moses in the lives of the Israelites?

---

**Or:**

Why do we remember Prophet Musa in the lives of the Banu Israelites?

---

37. **Either:**

Name any one symbol of the Holy Spirit on the Pentecost day.

---

**Or:**

Name any one symbol of Islam on a mosque.

---

38. **Either:**

How did Jesus show love to His people?

---

**Or:**

How did Prophet Muhammad show love to his people?

---

39. **Either:**

Why do Christians pray to God?

---

**Or:**

Why do Muslims pray to Allah?

---

40. **Either:**

Name the mountain where Moses received the Ten commandments.

---

**Or:**

Name the mountain where Prophet Muhammad (P.B.U.H) received the qu'ran.

---

### SECTION B

41.a) What do we call the movement of people from one place to another for settlement?

---

b) Give any two reasons why people move from one place to another for settlement.

(i) \_\_\_\_\_

(ii) \_\_\_\_\_

c) How can rural-urban migration be controlled?

---

42.a) Apart from the equator, mention any one other line of latitude.

---

b) Mention any two districts in Uganda that are crossed by the Equator.

(i) \_\_\_\_\_

(ii) \_\_\_\_\_

c) Write the units in which lines of latitude are measured.

---

43.a) From which direction did the Bantu enter Uganda?

---

b) Mention any two tribes under the Bantu in Uganda.

(i) \_\_\_\_\_

(ii) \_\_\_\_\_

c) Why did the Bantu settle in the lake region?

---

44.a) What is weather?

---

b) Mention any two elements of weather.

(i) \_\_\_\_\_

(ii) \_\_\_\_\_

c) Which type of weather helps farmers to winnow their dried crops.

---

45.a) How are lakes important to people around them?

(i) \_\_\_\_\_

(ii) \_\_\_\_\_

b) Give any one challenge facing lakes in Uganda.

---

c) Mention any one lake in Uganda which was formed as a result of down warping.

---

46.a) What are non-traditional cash crops?

---

b) Give any two examples of non-traditional cash crop.

(i) \_\_\_\_\_

(ii) \_\_\_\_\_

c) How can crop growing be possible in dry areas of Uganda?

---

47.a) Write L.C in full.

---

b) Give any two reasons why the government of Uganda has created many districts.

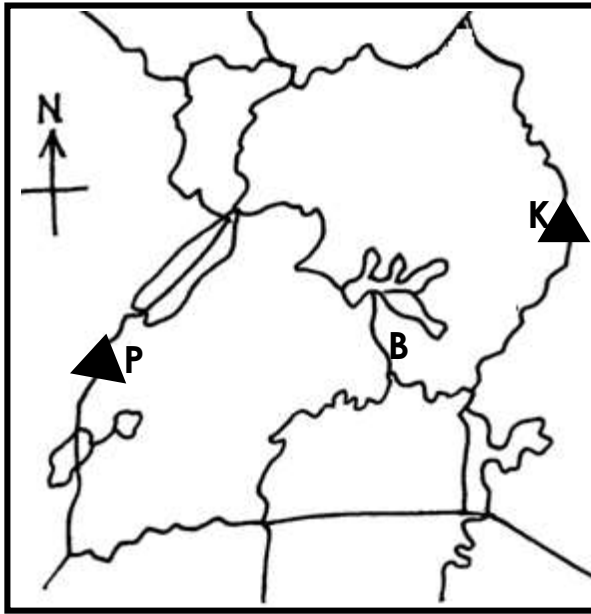
(i) \_\_\_\_\_

(ii) \_\_\_\_\_

c) What title is given to the political head of a district?

---

48. Study the map below and answer questions about it.



a) Why is the government of Uganda encouraging people not to settle on slopes of Mountain K?

\_\_\_\_\_

b) Name the part of river Nile labelled B.

\_\_\_\_\_

c) How is mountain labelled K and P different in terms of formation?

\_\_\_\_\_

\_\_\_\_\_

49.a) In which region of Africa do we find Uganda?

\_\_\_\_\_

b) How many countries makeup East Africa?

\_\_\_\_\_

c) Name two landlocked countries in East Africa.

(i) \_\_\_\_\_

(ii) \_\_\_\_\_

50. Complete the table below correctly.

Raw material	Product
_____	sugar
clay soil	_____
_____	insecticide
palm leaves	_____

For questions 51-55, answer either Christianity or Islam but not both on a number.

51. **Either:**

Write a short notes about each of the following apostles.

a) Simon Peter

\_\_\_\_\_

b) John the Baptist

\_\_\_\_\_

c) Judas Iscariot

\_\_\_\_\_

d) Jonah

\_\_\_\_\_

**Or:**

Write short notes about;

a) Hadijah

\_\_\_\_\_

b) Amina

\_\_\_\_\_

c) Prophet Isa

\_\_\_\_\_

d) Prophet Musa

\_\_\_\_\_



52. **Either:**

a) Give any two reasons why Christians fast.

(i) \_\_\_\_\_

(ii) \_\_\_\_\_

b) Mention any two groups of people who are excused from fasting.

(i) \_\_\_\_\_

(ii) \_\_\_\_\_

**Or:**

a) Give any two reasons why Muslims fast.

(i) \_\_\_\_\_

(ii) \_\_\_\_\_

b) Mention any two groups of people who are excused from fasting.

(i) \_\_\_\_\_

(ii) \_\_\_\_\_

53. **Either:**

a) What is a sin?

\_\_\_\_\_

b) Why should God's people keep away from the act of sinning?

\_\_\_\_\_

c) State any two dangers of sinning.

(i) \_\_\_\_\_

(ii) \_\_\_\_\_

**Or:**

a) What is a sin?

\_\_\_\_\_

b) Why should Allah's people keep away from the act of sinning?

\_\_\_\_\_

c) State any two dangers of sinning.

(i) \_\_\_\_\_

(ii) \_\_\_\_\_

54. **Either:**

a) To whom did God give the Ten Commandments?

\_\_\_\_\_

b) On which material was the Ten Commandments written when they were being given to the person named above?

\_\_\_\_\_

c) Give any two importance of the Ten Commandments to Christians.

(i) \_\_\_\_\_

(ii) \_\_\_\_\_

**Or:**

a) How many pillars of Islam do Muslims observe?

\_\_\_\_\_

b) Which pillar of Islamic faith is similar to the pillar of Islam?

\_\_\_\_\_

c) Give any two importance of pillars of Islam.

(i) \_\_\_\_\_

(ii) \_\_\_\_\_

55. **Either:**

a) Write down any two persons in the Holy Spirit.

(i) \_\_\_\_\_

(ii) \_\_\_\_\_

b) Give any two fruits of the Holy Spirit.

(i) \_\_\_\_\_

(ii) \_\_\_\_\_

**Or:**

a) Give any two ways in which you show your holiness to Allah.

(i) \_\_\_\_\_

(ii) \_\_\_\_\_

b) State any two fruits of holiness to Allah.

(i) \_\_\_\_\_

(ii) \_\_\_\_\_

**-End-**