

MOTHERCARE PREPARATORY SCHOOLS

END OF FIRST MONTH ASSESSMENT 2021

P.3 LITERCAY 1A (SCIENCE)

Name: _____

Branch: _____

SECTION A

1. Name one member found in a family.

2. Give one way of keeping your body clean.

3. Mention one use of water at home.

4. Write one building material.

5. Mention any one way of caring for domestic animals.

6. How useful are eyes to people.

7. Name the main, natural source of light in the environment.

8. Write one way of caring for our classroom.

9. Name this item made out of clay.



10. Give one way soil is formed.

11. Name one component of air.


12. Give one reason for giving First Aid to casualties.

13. In which season do farmers harvest their crops?

14. How useful is an umbrella to a P.3 child?

15. What are domestic animals?

16. Name this source of light.



17. Give one method of making water safe for drinking.

18. Write one activity children do at school.

19. How does a fish move?

20. Give one use of ears to a P.3 child.

21. Name one important place in our community.

22. What name is given to animals that live in the bush?

23. What part of a cassava plant do we eat?

24. Give one reason for eating food.

25. Write one way of caring for our bodies.

26. Name the young one of a goat.

27. Give one use of a hoe to a farmer.

28. Mention one way of controlling accidents at school.

29. Underline the odd man out.

loam, air, clay, sand

30. Write one way our environment can be kept clean.

31. Draw and name one item found in class.



32. State the part of the body used for chewing food.

33. Name the use of a broom in our class.

34. Name the type of soil used to make pots.

35. Why do people plant trees?

36. Give one product got from a cow.

37. Name part of a plant drawn below.



38. Give one use of the sun to people.

39. Mention one place where we can get food from.

40. What do we call the best soil for growing crops?

SECTION B


41.a) What are human activities?

b) Give two reasons why people carry out the human activities you have talked about in (a) above.

(i) _____

(ii) _____

c) Draw a man cutting down a tree.



42.a) Name the clouds that give us rain.

b) Give two uses of rain to people.

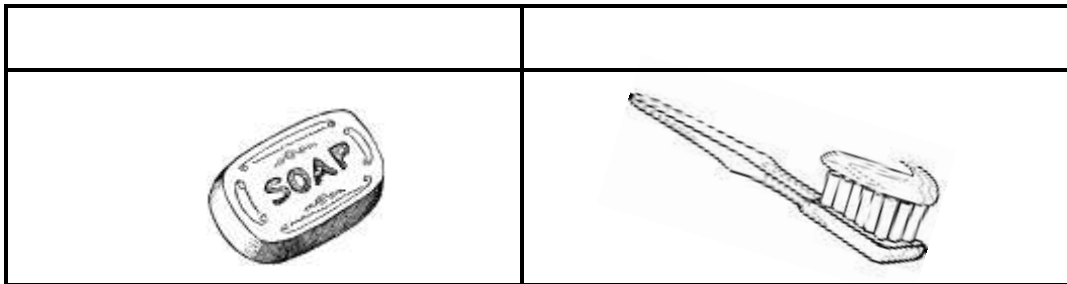
(i) _____

(ii) _____

c) Write down any one example of things used to collect rain water.

43.a) How do people keep their teeth clean?

b) Name these items used to clean our bodies.



c) Name any one part of your body.

44.a) What name is given to animals kept at home.

b) Give two examples of domestic animals.

(i) _____

(ii) _____

c) State one way of caring for domestic animals.

45.a) What are natural changes?

b) List down two examples of natural changes.

(i) _____

(ii) _____

c) State one effect of people made changes in the environment.

46.a) Give the meaning of the term air.

b) Mention two properties of air.

(i) _____

(ii) _____

c) Which component of air supports burning?

47. a) How are trees useful to people?

b) State one way of caring for trees in our compound.

c) Draw and name two things made out of wood.

48.a) What is the best soil for crop growing.

b) State two uses of soil to people.

(i) _____

(ii) _____

c) Which type of soil is used for building houses?

49.a) State two reasons why we eat food.

(i) _____

(ii) _____

b) Name one example of food we eat at school.

c) Mention one plant that provides us with fruits.

50.a) Which part of the body is used for tasting food.

b) Give the functions of these body organs.

Body organ

Function

eyes

ears

skin

51.a) Name the three main body parts of an insect.

(i) _____ (ii) _____

(iii) _____

b) What does an insect use for breathing?

52.a) Give one use of plants to people.

b) Mention one way of caring for plants.

c) Draw these plants.

potatoes	sugarcane

53.a) Give two reasons why animals move.

(i) _____

(ii) _____

b) Mention one way these animals move from one place to another.

(i) fish _____

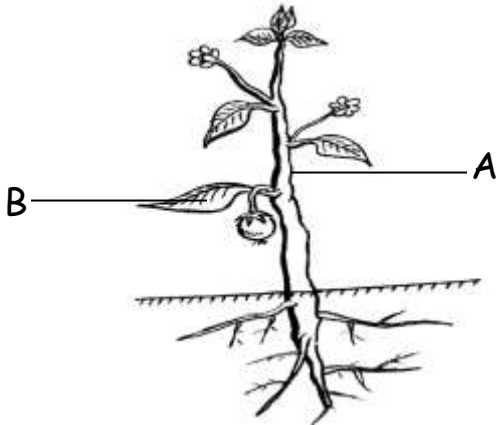
(ii) birds _____

54.a) Name any two places where we get food from.

(i) _____

(ii) _____

b) Name the parts of a plant shown below.



(i) A _____

(ii) B _____

55.a) Give the meaning of the term First Aid.

b) Mention any one item found in a First Aid box.

c) Give two reasons why people give First Aid.

(i) _____

(ii) _____

The end