

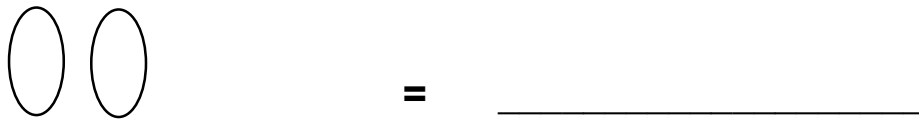
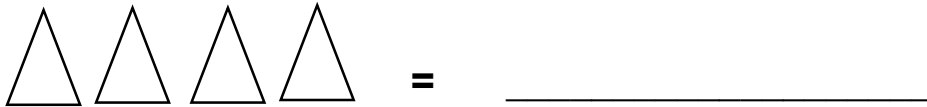
MOTHELCARE PREPARATORY SCHOOLS  
END OF FIRST MONTH ASSESSMENT 2021

P.1 MATHEMATICS

Name: \_\_\_\_\_ Stream: \_\_\_\_\_

Branch: \_\_\_\_\_

1. Count and write.




2. Fill in the missing numbers.

(a) 1, \_\_\_\_\_, 3, 4, \_\_\_\_\_

(b) 10, 11, 12, \_\_\_\_\_, 14, \_\_\_\_\_

3. Name the set below.



A set of \_\_\_\_\_


4. Name the shape below.



5. Circle the correct number.

2 5 9

6. Circle 4 beads.



7. Match correctly.

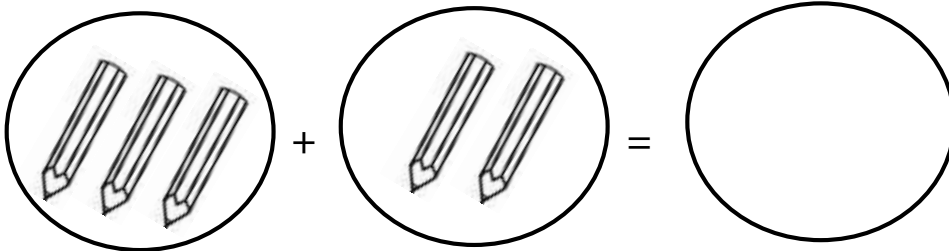
5 ten

8 two

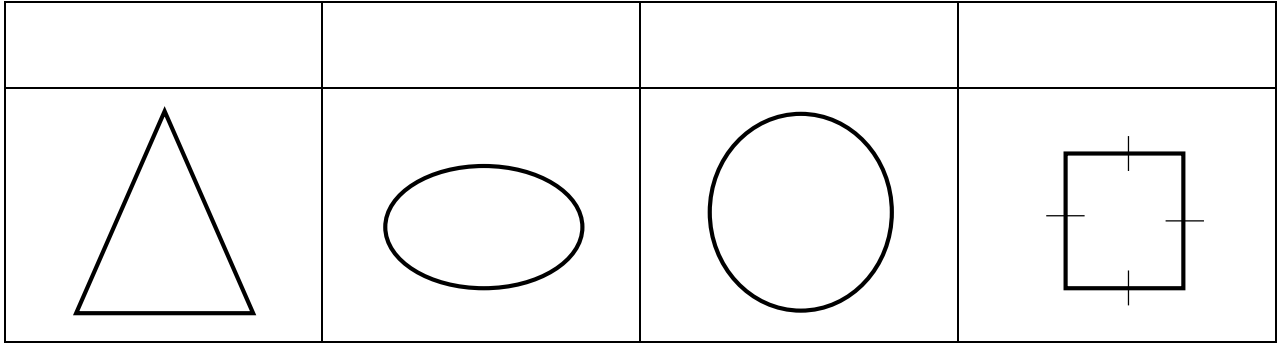
2 eight

10 five

8. Join the sets.




9. Name the shapes below.

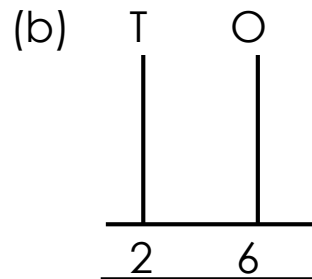
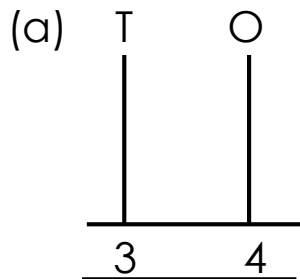


(square, triangle, oval, circle)


10. Draw six cups.






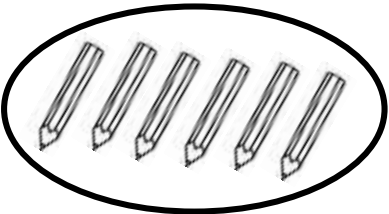
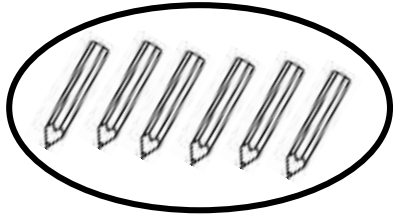

11. Draw beads on the abacus.



11. Make new sets.



12. Match the same things.



**13. Add correctly.**

(a) 
$$\begin{array}{r} 3 \quad + \quad 4 \quad = \quad \underline{\hspace{2cm}} \\ 000 \quad 0000 \end{array}$$

(b) 
$$\begin{array}{r} 6 \quad 000 \quad 000 \\ + \quad 4 \quad 0000 \\ \hline \\ \hline \end{array}$$

**14. Write the numbers in figures.**

(a) One = \_\_\_\_\_

(b) ten = \_\_\_\_\_

(c) Nine = \_\_\_\_\_

(d) five = \_\_\_\_\_

**15. Circle/ Ring the bigger number.**

(a) 7, 3

(b) 1, 9

(c) 2, 8

(d) 4, 6

**16. Count and match to the number.**



3



5



2

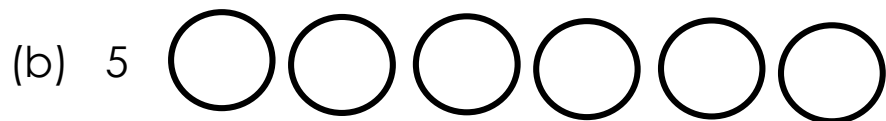
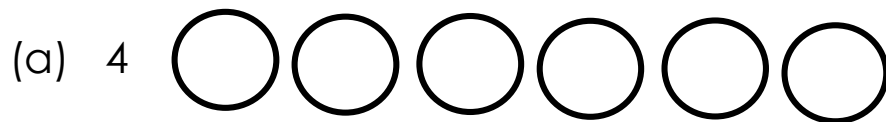
**17. Read and answer**

How many days make a week?

\_\_\_\_\_ days make a wee?

I have \_\_\_\_\_ fingers.

**18. Shade for the number.**



**19. Draw these sets.**

A set 3 cups	Empty set	A set of 5 ball

**20. Fill in correctly.**

Sunday, Monday, \_\_\_\_\_ Wednesday, \_\_\_\_\_

**\*END\***