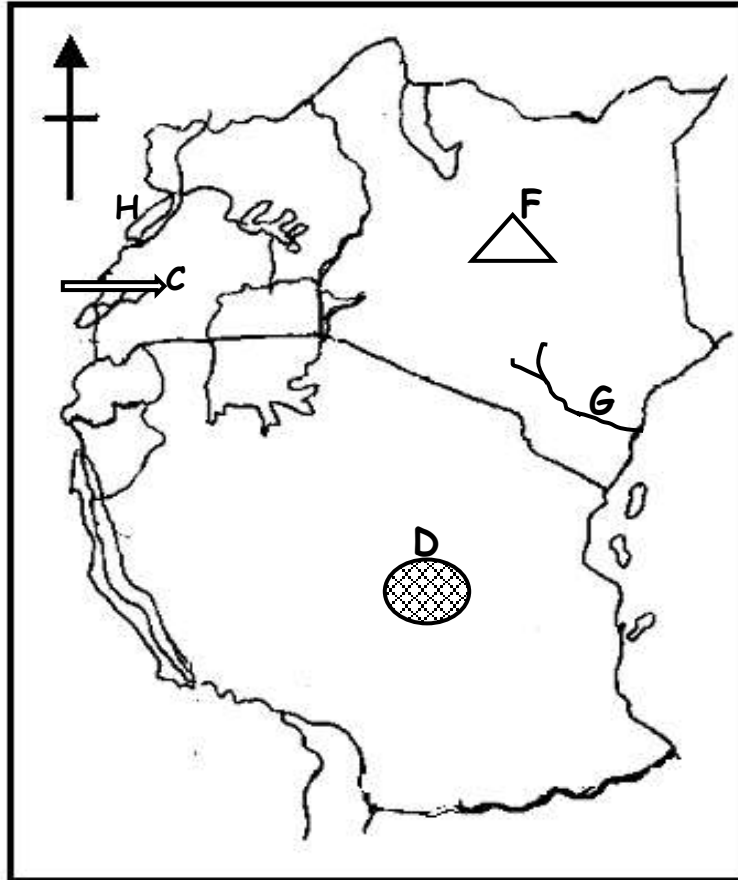




**MOTHELCARE PREPARATORY SCHOOLS**  
**HOLIDAY WORK - WEEK FOUR**  
**P.6 SOCIAL STUDIES**

Name: \_\_\_\_\_ Stream: \_\_\_\_\_

1. Use the map below to answer questions that follow.



- a) State two reasons why ethnic group marked **C** settled in the interlacustrine region.
- i) \_\_\_\_\_
- ii) \_\_\_\_\_
- b) Why is the area shaded  sparsely populated?
- \_\_\_\_\_
- c) Name the main economic activity carried out in the shaded area .
- \_\_\_\_\_
- d) State the political importance of river marked **K**.
- \_\_\_\_\_
- e) How was mountain marked **F** formed?
- \_\_\_\_\_

f) What name is given to a series of seven dams set up on river marked **G** in Kenya?

---

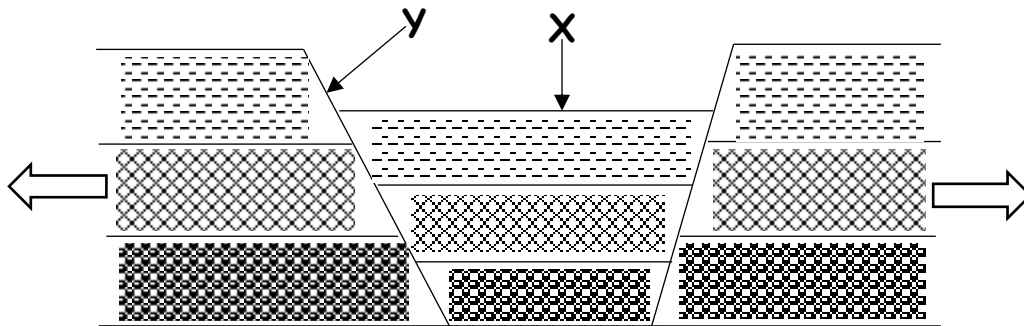
g) Write the economic bloc for the countries shown on the map.

---

h) In which way will the exploitation of mineral got from lake **H** benefit the people of Uganda?

---

2. The diagram below explains the formation of a physical feature. Use it to answer the questions that follow.



a) By what process was the physical feature in the diagram formed?

---

b) Name the forces showed by the arrows (⇔) on the diagram.

---

c) Mention the physical feature formed at;

(i) **X** \_\_\_\_\_

(ii) **Y** \_\_\_\_\_

d) List any two physical features formed by the same process which led to formation of feature **X** and **Y**.

(i) \_\_\_\_\_

(ii) \_\_\_\_\_

e) Write four characteristics of lakes found at **X**.

(i) \_\_\_\_\_

(ii) \_\_\_\_\_

(iii) \_\_\_\_\_

(ix) \_\_\_\_\_

-End-