

MOTHERCARE PREPARATORY SCHOOLS

HOLIDAY WORK TWO

TOP CLASS

NUMERACY

Name: _____ Stream: _____

1. Fill in the missing number.

0, _____, _____, 3, _____, 5, _____, 7.

11, _____, 13, _____, 15, _____, 17, _____, 19.

21, _____, 23, _____, 25, _____, 27, _____, 29.

2. Add;



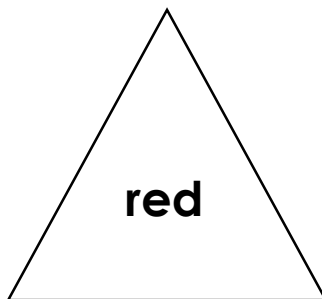
$4 + 2 = \underline{\quad}$

$9 + 1 = \underline{\quad}$

$$\begin{array}{r} 6 \\ + 6 \\ \hline \\ \hline \end{array}$$

$$\begin{array}{r} 7 \\ + 7 \\ \hline \\ \hline \end{array}$$

3. Colour the shapes.



4. Write in order.

3, 4, 5, 2, 0, 1 = _____

10, 13, 14, 11, 12 = _____

2, 4, 6, 5, 3 = _____

7, 9, 11, 6, 8, 10 = _____

5. Read and draw.


A set of 5 balls.




A set of 10 chairs.



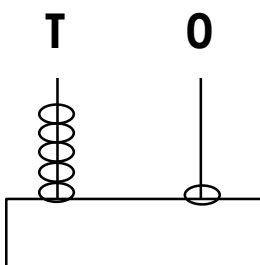
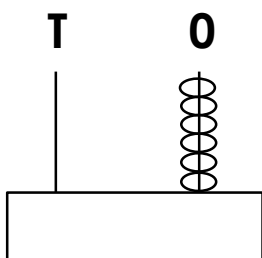
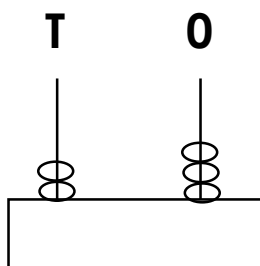
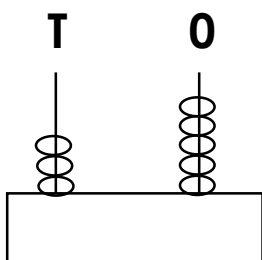
A set of 3 pots.



A set of 7 pencils.



6. Workout on the abacus.



7. Write the number symbols.

zero _____

sixteen _____

twenty _____

eleven _____

twelve _____

five _____

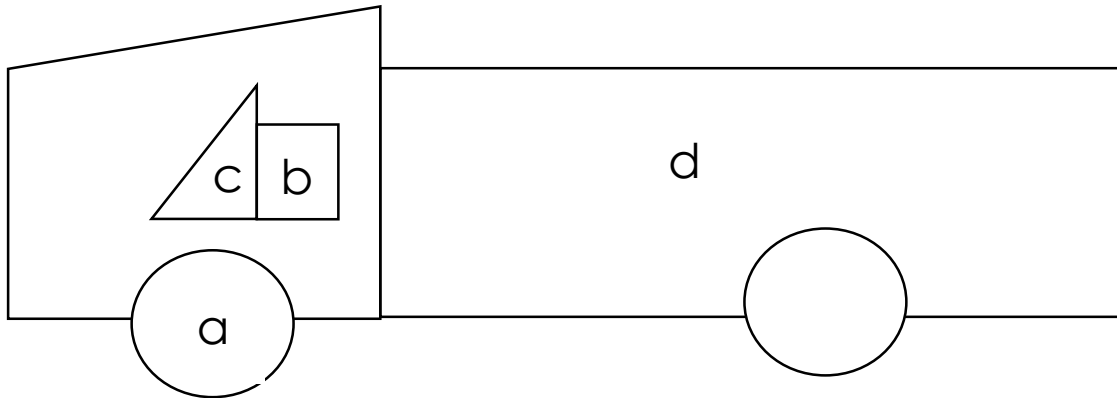
nine _____

thirteen _____

two _____

four _____

8. Name the shapes.



a = _____

c = _____

b = _____

d = _____

9. Write numbers 20 – 35.

	20				
					35

10. Read and draw.

<p>cone</p>	<p>square</p>
<p>triangle</p>	<p>circle</p>

END