

MOTHERCARE PREPARATORY SCHOOLS

ASSESSMENT 2 - 2021

P. 3 LIT 1 B(SST)

Name: _____ Stream: _____

Branch: _____

SECTION A

1. Name the type of weather that requires one to carry such an item.



2. Write down the basic need provided by domestic birds at home.

3. Give any **one** example of a food crop grown in your division / sub-county.

4. State any **one** importance of roads in a community.

5. A _____ is a person below eighteen years old.

6. Mention any **one** example of animals that provide people with milk.

7. Why do some people keep dogs in their homes?

8. Name the compass direction where the sun appears to set in the evening.

9. Why is it important for school pupils to have names?

10. What name is given to the movement of people and goods from one place to another?

11. Give any **one** reason why banks are very important in our community.

12. What is a picture?

13. **Draw and name one play material made by primary three children.**

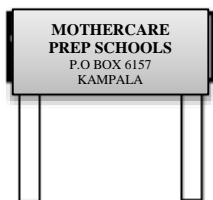


14. Who was the wife of the first Muganda?

15. Mention **one** way of caring for your classroom.

16. How are trees useful in a modern home?

17. **Name the school symbol drawn below.**



18. **Name the land form formed at point marked Y.**



19. How is a school nurse useful to us?

20. In which way are the children useful in a home?

21. How many members are found in Local Council 1 Committee?

22. Give any **one** use of land to people.

23. Why are newspapers read by very few people in your community?

24. Write down **one** member not found in an extended family.

25. Name any **one** social service provider in a school.

26. **Which element of weather is shown below?**



27. Why should people grow cash crops in our community?

28. **Draw and name any one item found in our classroom.**

29. **Identify the weapon shown below.**



30. Mention any **one** activity done by people in your division or sub-county to earn a living.

31. How many divisions make up Kampala?

32. Give **one** way children keep peace and security at home.

33. What is child abuse?

34. Name any **one** cardinal point of a compass direction.

35. Give the importance of a bell in a school.

36. Why do many people fear wild animals?

37. Write down one water animal that people eat.

38. Give one way a lake is useful to people.

39. Write down one cause of road accidents in your community?

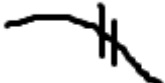
40. State one reason why people cut down trees.

SECTION B

41. a) Give any **one** use of a key to a map reader.

b) **Name the map symbols below.**

i)  _____

ii)  _____

c) Apart from the key, name any other element of a good map.

42. a) Name any **one** thing that man cannot live without.

b) Mention any **two** sources of basic needs.

i) _____

ii) _____

c) Why is it good for people to get basic needs?

43. **Match the following people correctly and then rewrite.**

A	B
a) doctor	provides education services
b) teacher	provides security services
c) carpenter	provides health services
d) policeman	makes furniture

A	B
a) doctor	_____
b) teacher	_____
c) carpenter	_____
d) policeman	_____

44. a) What are physical features?

b) Identify any **three** examples of physical features found in your area.

i) _____

ii) _____

iii) _____

45. a) What are children's rights?

b) State any **two** examples of children's rights.

i) _____

ii) _____

c) Write down **one** responsibility of children in a home.

46. a) state any **one** example of a culture that is promoted in your school.

b) Give any **one** cultural activity done in your community.

c) How do your parents promote their culture at home?

d) Give **one** importance of culture in a community.


47. a) Mention any **two** of the means of road transport.

i) _____

ii) _____

b) Apart from road transport, name another type of transport.

c) **Draw one means of railway transport in the space provided below.**



48. a) Mention any **two** sources of water.

i) _____

ii) _____

b) Give **two** ways people in your community use water.

i) _____

ii) _____

49. a) _____ is a group of people related by blood, marriage or adoption.

b) **Draw and name two people found in a nuclear family.**

c) Why are some families able to get their basic needs easily?

50. a) Name **one** of the security organs found in your community.

b) How are police officers useful in our communities?

c) Give any **two** social services provided in your sub-county / division.

i) _____




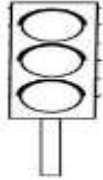
ii) _____

51. a) _____ is the condition of the atmosphere of a place at a given time.

b) Name the types of weather drawn below.



52. Match the following road signs to their meaning correctly.

	Accident ahead.
	Humps a head.
	Traffic lights.
	Parking.

53. a) What are economic activities?

b) Write down **two** economic activities that are done by people in town.

i) _____ ii) _____

c) Give **one** reason why people carry out economic activities.

54. Complete the table below correctly.

Social center service	Social service
Schools	_____
_____	Health service
Airport	_____
_____	Security

55. a) _____ is the movement of people and their goods from one place to another.

b) **Draw and name two means of road transport in the space provided.**

c) Give **one** way of reducing road accidents.

******* Good Luck *******