

# MOTHERCARE PREPARATORY SCHOOLS

## ASSESSMENT 2 - 2021

### P. 1 MATHEMATICS

Name: \_\_\_\_\_ Stream: \_\_\_\_\_

Branch: \_\_\_\_\_

#### SECTION A

1. Add  
 $9 + 7 =$  \_\_\_\_\_

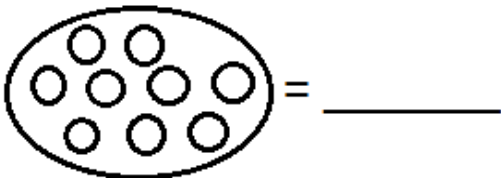
2. Write the number name  
 $16 =$  \_\_\_\_\_

3. Name the shape below.



4. Take away  
 $10 - 7 =$  \_\_\_\_\_

5. How many are they?

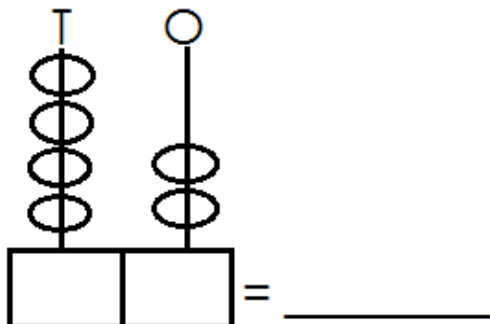


6. Multiply  
 $3 \times 4 =$  \_\_\_\_\_

7. Complete correctly  
 $24 =$  \_\_\_\_\_ tens \_\_\_\_\_ ones.

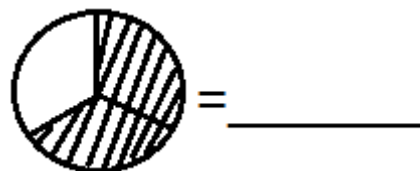
8. Write the figure  
 $10 =$  \_\_\_\_\_

9. Complete the abacus.



10. Four plus three equals \_\_\_\_\_

11. Name the shaded fraction.



12. One boy has 2 eyes. Three boys have \_\_\_\_\_ eyes.

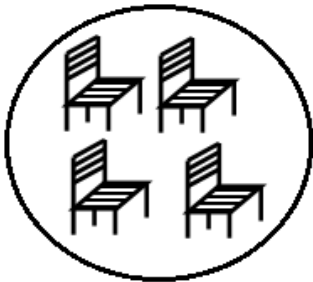
13. Take away

$$\begin{array}{r} 64 \\ - 32 \\ \hline \\ \hline \end{array}$$

14. Find the missing number

$$\square + 5 = 8$$

15. Name this set.



A set of

17. Write in words.

$$\frac{1}{2} = \underline{\hspace{2cm}}$$


19. Fill in the missing letters.

J\_\_\_\_\_nuary

20. Add the fractions


$$\frac{2}{5} + \frac{1}{5} = \underline{\hspace{2cm}}$$

16. Write the tens and ones.



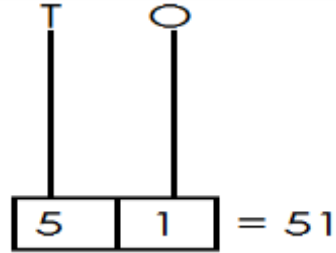
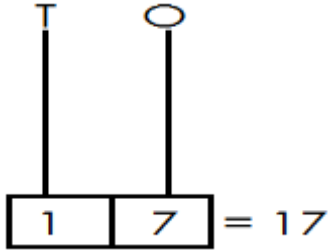
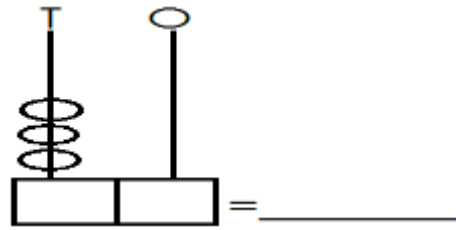
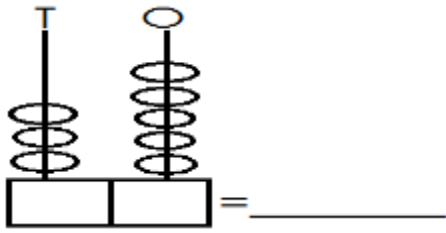
\_\_\_\_\_ tens \_\_\_\_\_ ones = \_\_\_\_\_

18. Show the time 2 o'clock



## SECTION B

21. Complete



22. Multiply these numbers.

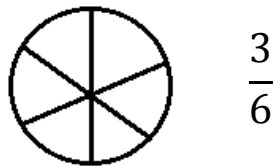
$$4 \times 2 = \underline{\hspace{2cm}}$$

$$\begin{array}{r} 6 \\ \times 2 \\ \hline \\ \hline \end{array}$$

$$\begin{array}{r} 20 \\ \times 3 \\ \hline \\ \hline \end{array}$$

$$\begin{array}{r} 43 \\ \times 2 \\ \hline \\ \hline \end{array}$$

23. Shade the given fractions.



Work out

$$\frac{3}{7} + \frac{2}{7} =$$

$$\frac{5}{9} - \frac{3}{9} =$$

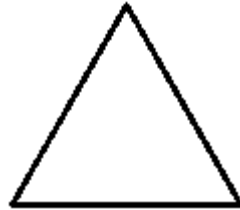
24. Add

$$\begin{array}{r} + 6 \\ 5 \\ \hline \\ \hline \end{array}$$

$$\begin{array}{r} + 6 \quad 1 \\ 2 \quad 0 \\ \hline \\ \hline \end{array}$$

$$\begin{array}{r|l} T & O \\ + 3 & 4 \\ 1 & 3 \\ \hline \\ \hline \end{array}$$

25. Name the given fractions.



(triangle square kite cone)

26. Use lighter or heavier.



A stone is \_\_\_\_\_ than a pencil.

A pencil is \_\_\_\_\_ than a stone.

27. Complete

a) Write any two days of the week.

i) \_\_\_\_\_

ii) \_\_\_\_\_

b) Fill in the missing letters.

(i) A\_\_\_\_gust

(ii) Dec\_\_\_\_mber

28. Take away

a)

$$\begin{array}{r} 8 \quad 4 \\ - 2 \quad 1 \\ \hline \\ \hline \end{array}$$

b) Nine take away three equals

\_\_\_\_\_

c) Joshua had 10 mangoes. 6 mangoes were bad. How many mangoes were good?

29. Match correctly.

Sunday

4 legs

Chair

3

Ball

first day

$5 - 2 =$

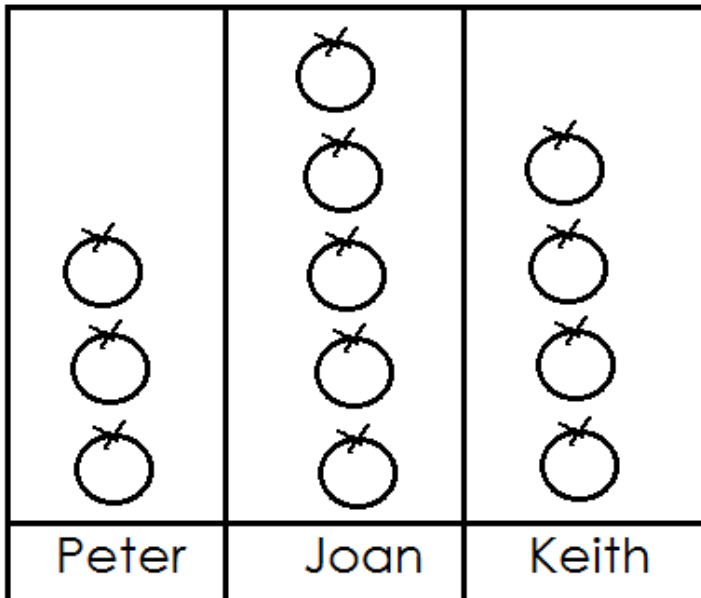
circular

30. Write the number name.

11 = \_\_\_\_\_

20 = \_\_\_\_\_

31. Study the graph and answer questions.



a) Who has more apples?

b) Peter has \_\_\_\_\_ apples.

c) How many apples do they have altogether?

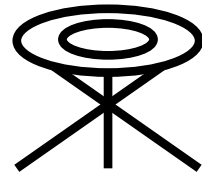
32. Study the cost of things in the market.



500 shillings



300 shillings



400 shillings

a) How much will you pay for a stool?

b) Name the item that costs 500 shillings.

c) Write the cost of a cup.

**\*\*\*\*\*GOD BLESS\*\*\*\*\***