

MOTHERCARE PREPARATORY SCHOOLS
TOP CLASS ASSESSMENT ONE - 2021
NUMERACY (LEARNING AREA 4)

Name: _____ Stream: _____

1. Circle the smaller number.

1 and 2

4 and 14

0 and 10

5 and 11

25 and 5







3 and 33

7 and 1

8 and 6

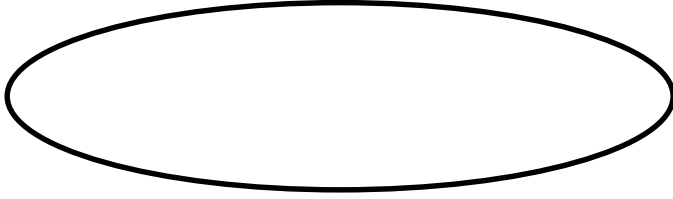
3 and 2

2. Read, draw and colour.

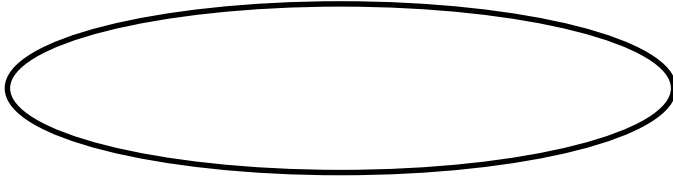
A yellow star	A red heart
	
A blue circle	A brown rectangle
	
A black square	A green triangle
	

3. Read and draw the sets.

a) Set A has 3 chairs.




b) Set B has 5 sticks.



c) Set _____ has more members than set _____.


4. Use bigger, smaller, taller or shorter to tell the size of the object.




basket **p** is _____



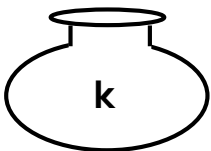
basket **q** is _____



tree **b** is _____



tree **c** is _____



pot **k** is _____



pot **z** is _____

5. Cut off.

$4 - 3 = \underline{\hspace{2cm}}$



$5 - 2 = \underline{\hspace{2cm}}$



$10 - 6 = \underline{\hspace{2cm}}$



$2 - 1 = \underline{\hspace{2cm}}$



$12 - 6 = \underline{\hspace{2cm}}$



$15 - 5 = \underline{\hspace{2cm}}$



6. Add money.

$200/=$

$100/=$

$200/=$

$200/= + 50/=$

$+200/=$

$+200/=$

$**250/=**$

$500/=$

$600/=$

$+500/=$

$+100/=$

7. Add in words.

one plus one equals two
○ ○

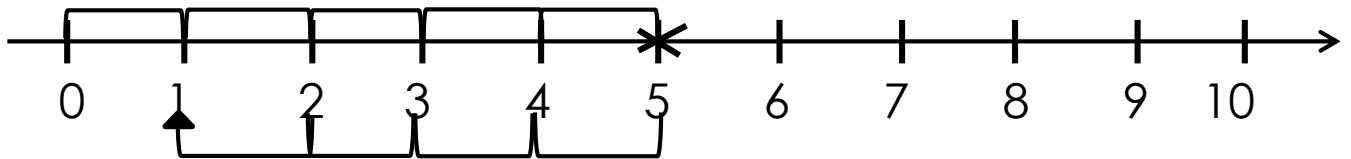
three plus two equals _____

four plus three equals _____

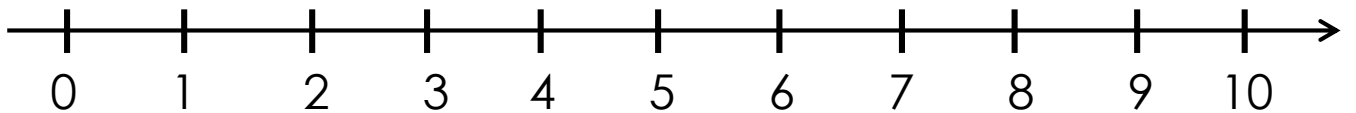
five plus five equals _____

4. Take away using a numberline.

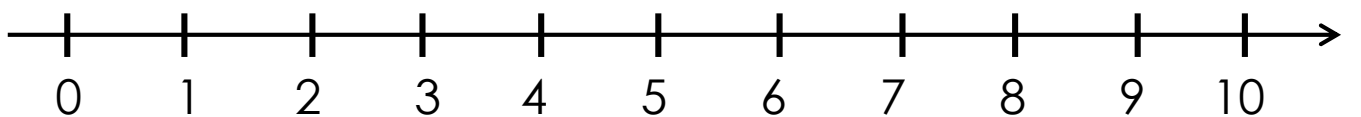
5 - 4 = 1



7 - 3 = _____



9 - 6 = _____



-End-