

# MOTHECARE PREPARATORY SCHOOLS

## ASSESSMENT WORK TERM II 2020 - SET 2

### PRIMARY THREE LITERACY 1B (SST)

Name: \_\_\_\_\_ Stream: \_\_\_\_\_

Branch: \_\_\_\_\_

#### SECTION A

1. Name one animal that gives us milk.

\_\_\_\_\_

2. Give one animal used for transport.

\_\_\_\_\_

3. Name one example of a bank in your area.

\_\_\_\_\_

4. Why should we have police station in your area?

\_\_\_\_\_

5. How is a bank useful in our community?

\_\_\_\_\_

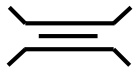
6. Which elements of a good map interprets maps symbol?

\_\_\_\_\_

7. Who was the wife of Kintu?

\_\_\_\_\_

8. Name the map symbol below.



\_\_\_\_\_

9. In which season do farmers plant their crops?

\_\_\_\_\_

10. Name the water harvester made out of clay?

\_\_\_\_\_

11. How is rainfall important to people?

\_\_\_\_\_

12. Give any one example of records kept at school.

\_\_\_\_\_

13. Why do people carry out projects?

\_\_\_\_\_

14. Give any one crop commonly grown in swamps.  
\_\_\_\_\_
15. What do we call the state of being male or female?  
\_\_\_\_\_
16. Name any one form of child abuse.  
\_\_\_\_\_
17. State any one of the four major points of a compass?  
\_\_\_\_\_
18. Where do pedestrians cross the busy road from?  
\_\_\_\_\_
19. From which direction does the sun rise?  
\_\_\_\_\_
20. Name any one school symbol.  
\_\_\_\_\_
21. \_\_\_\_\_ are natural freedoms a child must enjoy.
22. At what age is one considered an adult according to Ugandan law?  
\_\_\_\_\_
23. Name the physical feature that is found between two close hills.  
\_\_\_\_\_
24. How is Lake Katwe important to Ugandans?  
\_\_\_\_\_
25. Give one raw material got from a swamp.  
\_\_\_\_\_
26. State one main natural source of water.  
\_\_\_\_\_
27. Give one important place in your school.  
\_\_\_\_\_
28. How many colours does the Uganda flag have?  
\_\_\_\_\_
29. Give one danger faced by children on their way to and from school.  
\_\_\_\_\_


30. Give one example of a project you know.

---

31. Which domestic animal is used to guard our homes?

---

32. Draw any one craft item in the space provided.



33. Mention any one leader at school.

---

34. How is a hoe important to a farmer?

---

35. How are plants useful to people?

---

36. Give one item used to tell time.

---

**From 37 - 40, give one word for the underlined words.**

37. Every day children go to places where we learn or study.

---

38. Our division has many land forms of an area.

---

39. Most Ugandans are people who grow crops and rear animals.

---

40. Mr. Opolot was arrested for killing animals which live in the bush.

---

## SECTION B

41.a) What do we call something man uses to meet his needs?

---

b) Give two examples of resources in our division.

(i) \_\_\_\_\_

(ii) \_\_\_\_\_

c) Which is the most important resource in our division?

---

42.a) \_\_\_\_\_ are activities carried out to get knowledge, skills and money.

b) Mention any two examples of projects you know.

(i) \_\_\_\_\_

(ii) \_\_\_\_\_

c) Give one reason why people carry out projects.

---

43.a) What are water harvesters?

---

b) Mention any two examples of water harvesters at home.

(i) \_\_\_\_\_

(ii) \_\_\_\_\_

c) Give one use of water at home.

---

44.a) What do we call a place where people keep their money safely?

---

b) Give any two uses of commercial banks in Uganda.

(i) \_\_\_\_\_

(ii) \_\_\_\_\_

c) Give one item kept in a bank.

---

45.a) Give one thing that make up people's culture.

---

b) Give the staple food for the following tribes.

Tribe

staple food

Baganda

\_\_\_\_\_

Basoga

\_\_\_\_\_

Iteso

\_\_\_\_\_

46.a) What are physical features?

\_\_\_\_\_

b) Mention any two examples of physical features in Uganda.

(i) \_\_\_\_\_

(ii) \_\_\_\_\_

c) Which is the highest mountain in Uganda?

\_\_\_\_\_

47.a) State one item used to keep peace.

\_\_\_\_\_

b) Give two groups of people who provide peace and security.

(i) \_\_\_\_\_

(ii) \_\_\_\_\_

c) Give one way of keeping peace and security in a home.

\_\_\_\_\_

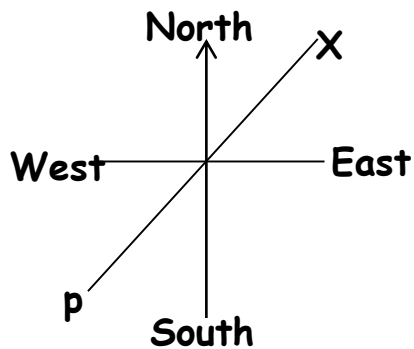
48.a) Give any one item used to find direction of places.

\_\_\_\_\_

b) Give the importance of a compass to a pilot.

\_\_\_\_\_

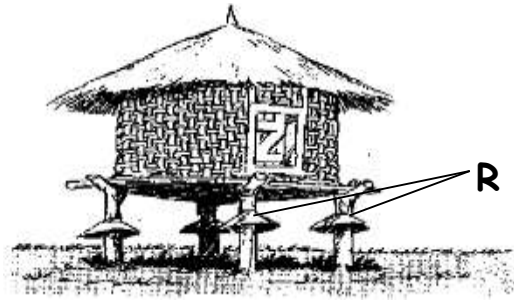
c) Name these points on a compass rose.



(i) X \_\_\_\_\_

(ii) P \_\_\_\_\_

49. Study the diagram below and answer the questions.



a) Name the above storage facility.

\_\_\_\_\_

b) Name the part marked with letter R.

\_\_\_\_\_

c) Name any two crops which can be kept in the above diagram.

(i) \_\_\_\_\_ (ii) \_\_\_\_\_

50.a) During which season do farmers plant their crops?

\_\_\_\_\_

b) Give two activities done in dry season.

(i) \_\_\_\_\_

(ii) \_\_\_\_\_

c) State one danger of too much rainfall to a farmer.

\_\_\_\_\_

51.a) Name one lake found in Uganda.

\_\_\_\_\_

b) Draw the following map symbols below.

Waterfalls	Mountain peak	Valley

52.a) What are domestic animals?

\_\_\_\_\_

b) Give two examples of domestic animals.

(i) \_\_\_\_\_ (ii) \_\_\_\_\_

c) Why do people keep domestic animals?

\_\_\_\_\_

53.a) What do we call the use of money to pay for goods and services?

\_\_\_\_\_

b) Give two items we spend money on.

(i) \_\_\_\_\_ (ii) \_\_\_\_\_

c) Give one way of spending wisely.

\_\_\_\_\_

54.a) \_\_\_\_\_ is the violation of children's rights.

b) Give any three rights of children.

(i) \_\_\_\_\_

(ii) \_\_\_\_\_

(iii) \_\_\_\_\_

55. Match items in list **A** to those in list **B** correctly.

<b>Service centre A</b>	<b>Social service B</b>
Post office	Transport
School	Communication
Police station	Education
Railway station	Security

**Correct order**

(i) Post office \_\_\_\_\_

(ii) School \_\_\_\_\_

(iii) Police station \_\_\_\_\_

(iv) Railway station \_\_\_\_\_

**-End-**