

**MOTHELCARE PREPARATORY SCHOOLS**  
**ASSESSMENT WORK TERM II 2020 (SET 2)**  
**P.4 SOCIAL STUDIES & RELIGIOUS EDUCATION**

**NAME:** \_\_\_\_\_ **STREAM:** \_\_\_\_\_

**BRANCH:** \_\_\_\_\_

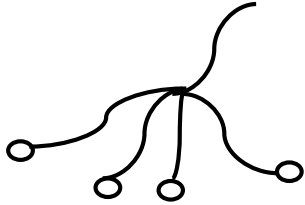
**SECTION A**

1. What is a map?  
\_\_\_\_\_
2. State any one duty of a family head.  
\_\_\_\_\_
3. Give the biggest hospital in Uganda.  
\_\_\_\_\_
4. Who was the Mugisu?  
\_\_\_\_\_
5. How was fire important to early man?  
\_\_\_\_\_
6. Name the largest ethnic group in Uganda?  
\_\_\_\_\_
7. Name one planted forest in Uganda.  
\_\_\_\_\_
8. What do we call a family where we find the father, mother and their biological children?  
\_\_\_\_\_
9. How do we control soil erosion in a school?  
\_\_\_\_\_
10. What is a forest?  
\_\_\_\_\_
11. Give one group of people who use a compass in their daily life.  
\_\_\_\_\_
12. Why do most people in our district use road transport?  
\_\_\_\_\_

13. Give any one importance of lakes to man.

---

14. Name the tool below which was used by early man.



---

15. How is a veterinary doctor important in a community?

---

16. Give any one group of people who keep law and order in our community.

---

17. Give any one importance of hard wood.

---

18. State any one reason why people leave villages to towns.

---

19. What is trade?

---

20. Give any one source of a social activity in our community.

---

21. Give any one source of water in our community.

---

22. State one way of preserving fish.

---

23. Which raw material do we use for making pots?

---

24. Give any one effect of child abuse.

---

25. What do we call the landforms of an area?

---

26. Give any one reason why people make craft materials.

---

27. Name the father of Gipiir and Labong?

---

28. State any one need of a farmer.

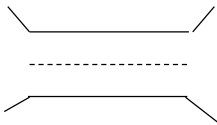
29. Give any one example of economic activity done by people in Wakiso district.

30. Give any one example of food crops.

31. State any one type of fish caught in Uganda.

32. Give any one animal used for transport.

33. Name the map symbol below.



34. Which lake in Uganda provides us with salt?

35. Give any one important place in your district.

**For questions 36 - 40, answer either Christianity or Islam but not Both.**

36. **Either**: State the holy book for Christians.

**Or** : State the holy book for Muslims.

37. **Either**: In how many days did God create the Universe?

**Or** : In how many days did Allah create the Universe?

38. **Either** :What do we call the fasting period for Christians?

**Or** : What do we call the fasting period for Muslims?

40. **Either**: Mention one parable you know.

\_\_\_\_\_

**Or** : Mention any one example of impurities in Islam.

\_\_\_\_\_

**SECTION B:**

41. a) Give any two examples of physical features.

(i) \_\_\_\_\_

(ii) \_\_\_\_\_

b) How is Lake Katwe important to people of Uganda?

\_\_\_\_\_

c) Apart from Lake Katwe, give any one other example of a lake in Uganda.

\_\_\_\_\_

42.a) What is Vegetation?

\_\_\_\_\_

\_\_\_\_\_

b) Give any two forests found in Uganda.

(i) \_\_\_\_\_ (ii) \_\_\_\_\_

c) State any one way forests are important in the community.

\_\_\_\_\_

43.a) What are economic activities?

\_\_\_\_\_

\_\_\_\_\_

b) Give any two economic activities done by people in your district.

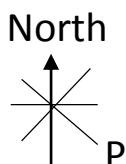
(i) \_\_\_\_\_

(ii) \_\_\_\_\_

c) State any one reason why people in your community work.

\_\_\_\_\_

44. Study the diagram below and answer questions that follow.



a) Name the instrument above.

\_\_\_\_\_

b) Give two groups of people who use the instrument above.

(i) \_\_\_\_\_

(ii) \_\_\_\_\_

c) Name the direction where the compass needle point when at rest.

\_\_\_\_\_

45.a) Give one reason why ethnic groups migrated long ago.

\_\_\_\_\_

b) Write any one ethnic group in Uganda.

\_\_\_\_\_

c) Name the languages spoken by the following;

(i) Basoga - \_\_\_\_\_

(ii) Iteso - \_\_\_\_\_

46. Match the people in A with their responsibilities in B.

	A	B
(i)	Teacher	- treats sick people in the community.
(ii)	Doctor	- trims people's hair
(iii)	Trader	- teaches pupils in a school.
(iv)	Barber	- buys and sells goods in the community.

**Correct order**

(i) Teacher \_\_\_\_\_

(ii) Doctor \_\_\_\_\_

(iii) Trader \_\_\_\_\_

(iv) Barber \_\_\_\_\_

47. a) What are food crops?

\_\_\_\_\_

b) Give two example of food crops grown in your district.

(i) \_\_\_\_\_

(ii) \_\_\_\_\_

c) Why do people grow food crops?

\_\_\_\_\_

48. Study the craft item below and answer questions that follow.



a) Name the craft item drawn above.  
\_\_\_\_\_

b) From which material was the drawn item made?  
\_\_\_\_\_

c) Give any one use of the item above.  
\_\_\_\_\_

d) Apart from the item above, give any other craft item you know.  
\_\_\_\_\_

49.a) State any one district neighbouring Wakiso district.  
\_\_\_\_\_

b) Give any one reason why a country is divided into districts.  
\_\_\_\_\_

c) In which region of Uganda is Wakiso district?  
\_\_\_\_\_

d) Name the political head of a district.  
\_\_\_\_\_

50.a) Give any two examples of child abuse.

i) \_\_\_\_\_

ii) \_\_\_\_\_

b) State any one group of people who practice child abuse.  
\_\_\_\_\_

c) Name the L.C 1 committee member in-charge of children's welfare.  
\_\_\_\_\_

**For questions 51- 55, answer either Christianity Or Islam but not both.**

51. **Either:**

(a) Who promised to send the Holy Spirit to the Apostles?  
\_\_\_\_\_

(b) Give any one of the twelve Apostles.  
\_\_\_\_\_

(c) Apart from God the Holy Spirit, name the other persons that make up the Holy Trinity.  
\_\_\_\_\_

**Or:**

(a) Give the importance of Qur'an to Muslims.

---

(b) Apart from Qur'an, name three books in Islam.

---

52. **Either:**

(a) Give the punishments given to the following after disobeying God.

(i) Adam : \_\_\_\_\_

(ii) Eve : \_\_\_\_\_

(iii) Serpent (snake): \_\_\_\_\_

(b) In which book is the story of Adam and Eve found?

---

**Or:**

(a) Who was the wife of Prophet Adam?

---

(b) State the first two sons of Prophet Adam.

(i) \_\_\_\_\_ (ii) \_\_\_\_\_

(c) What should a Muslim do after sinning?

---

53. **Either:**

(a) What is Lent?

---

(b) Give two importance of Lent to Christians.

(i) \_\_\_\_\_

(ii) \_\_\_\_\_

(c) What day marks the beginning of Lent in Christianity?

---

**Or:**

(a) What is Saum?

---

(b) Give two importance of Saum.

(i) \_\_\_\_\_

(ii) \_\_\_\_\_

(c) What festival/day marks the end of Saum?

\_\_\_\_\_

54. **Either:**

(a) In which book of the Bible do we find the story of Moses getting the Ten Commandments?

\_\_\_\_\_

(b) On which mountain did Moses receive the Ten Commandments?

\_\_\_\_\_

**Or:**

(a) Who received the Holy Qur'an?

\_\_\_\_\_

(c) Apart from Prophet above, give any other three Prophets in Islam.

(i) \_\_\_\_\_ (ii) \_\_\_\_\_

(iii) \_\_\_\_\_

55. **FOR BOTH:**

(a) Give any two groups of people who need help in the community.

(i) \_\_\_\_\_

(ii) \_\_\_\_\_

(b) How can you help such people mentioned above?

\_\_\_\_\_

**THE END**