

MOTHELCARE PREPARATORY SCHOOLS
TOP CLASS ASSESSMENT WORK TERM II 2020 SET 1

NAME: _____ STREAM: _____

READING

1. Read and match.

gate



ink-pot




train



flower



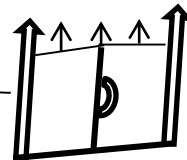
dress



book



rain



2. Fill in the sound “oa” and the word.

g ___ t

b ___ t

t ___ d

s ___ p

f ___ t

c ___ t

s ___ k

r ___ d

b ___ rd

___ ts

3. Match a sound to the right word.

ai

igh

oa

ie

y

i-e

nine

cry

high

boat

rain

pie

4. Circle “igh” words.

vest

high

tent

light

flat

night

kite

bright

there

van


thigh

right


5. Fill in the missing words.

One day  _____ was going to the 

_____. On her way to the hospital she

found a  _____ accident. She helped a

 _____ who was so injured and took her to

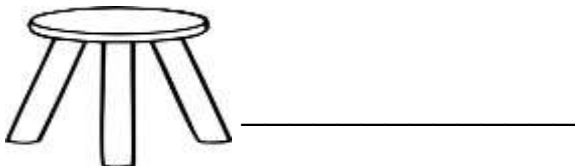


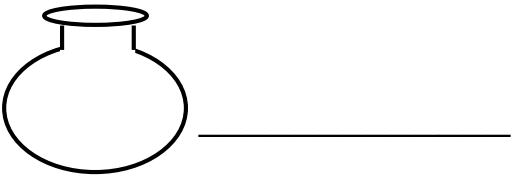
the  _____.

ENGLISH

6. Match the capital letters to small letters.

A	e
B	g
C	a
D	f
E	b
F	c
G	d

7. Name the pictures.



8. Match correctly.

CAT

sheep

RABBIT

cow

GOAT

dog

DUCK

cat

PIG

rabbit

DOG

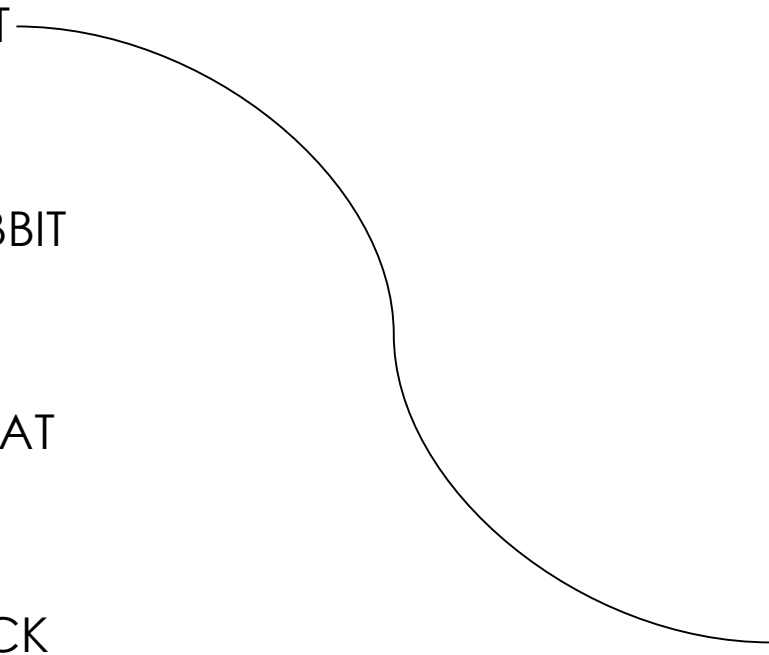
goat

COW

duck


SHEEP

pig




9. Draw these garden tools.


hoe




knife




slasher




wheelbarrow



axe



panga



10. Fill in "a" or "an".

He has _____ mango.

I can see _____ egg.

This is _____ orange.

That is _____ good house.

I have _____ umbrella.

I like _____ banana.

11. Read and fill correctly.

(in , under , on , near , over)




The water is _____ the cup.



The bird is flying _____ the tree.



The ball is _____ the table.



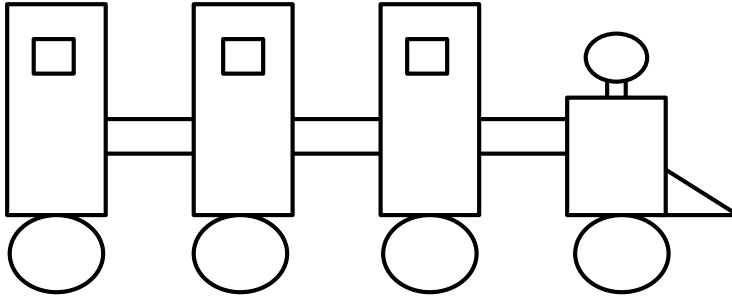
The pencil is _____ the tin.



The cat is _____ the chair

NUMERACY

12. How many?



circles _____

rectangles _____

squares _____

triangles _____

13. Write the words for these numbers.

2 _____

1 _____

3 _____

4 _____

5 _____

(one , five , three , two , four)

14. Add these numbers.

$$6 + 4 = \underline{10}$$

○○○ ○○
○○○ ○○

$$2 + 2 = \underline{\hspace{2cm}}$$

$$10 + 5 = \underline{\hspace{2cm}}$$

$$5 + 5 = \underline{\hspace{2cm}}$$

$$2 + 3 = \underline{\hspace{2cm}}$$

$$3 + 1 = \underline{\hspace{2cm}}$$

$$4 + 3 = \underline{\hspace{2cm}}$$

$$8 + 4 = \underline{\hspace{2cm}}$$

$$7 + 1 = \underline{\hspace{2cm}}$$

$$9 + 0 = \underline{\hspace{2cm}}$$

15. Write the next number.

5, **6**

3,

19,

1,

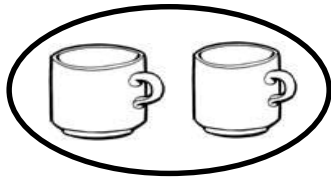
16,

0,

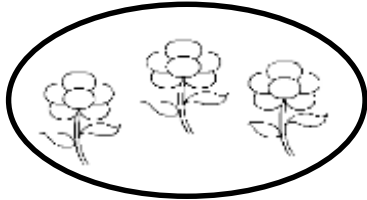
7,

8,

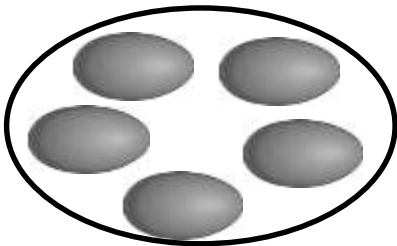
16. How many?




A set of _____ cups.



A set of _____ flowers.



A set of _____ eggs.



A set of _____ chairs.

17. Count and cross the number.

6 = ~~○~~ ~~○~~ ~~○~~ ~~○~~ ~~○~~ ~~○~~ ○ ○

10 = ○ ○ ○ ○ ○ ○ ○ ○ ○ ○ ○ ○

7 = ○ ○ ○ ○ ○ ○ ○ ○ ○ ○ ○ ○

15 = ○ ○ ○ ○ ○ ○ ○ ○ ○ ○ ○ ○ ○ ○ ○ ○ ○ ○

8 = ○ ○ ○ ○ ○ ○ ○ ○ ○ ○ ○ ○ ○ ○ ○ ○


0 = ○ ○ ○ ○ ○ ○ ○ ○ ○ ○ ○ ○

DRAWING

18. Draw these important places.


church	mosque
School	hospital

19. Draw a farmer in a garden.



SHADING

20. Enjoy colouring.



-End-