

MOTHERCARE PREPARATORY SCHOOLS

ASSESSMENT WORK TERM II 2020 SET I

P.1 MATHEMATICS


NAME: _____ STREAM _____

BRANCH: _____


1. **Add:** $2 + 4 =$ _____ $6 + 2 + 1 =$ _____

$$\begin{array}{r} 4 \quad 4 \\ + \quad 2 \\ \hline \end{array}$$

2. **Name the sets.**



A set of _____.



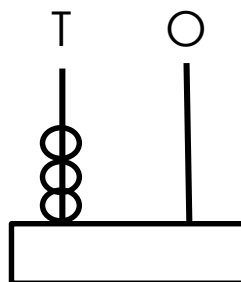
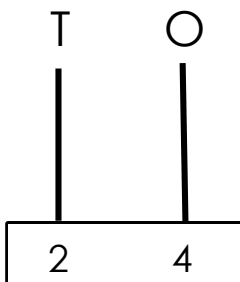
A set of _____.

3. **Circle the bigger number.**

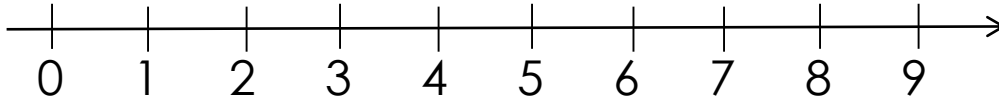
8 and 10

12 and 2

4. **Complete the abacus.**



b. $4 + 1 =$ _____



10. **Subtract/take away.**

$6 - 4 =$ _____

T	O
5	2
-	1
<hr/>	

4
- 2

11. **Use shorter or taller.**



Tree **A** is _____ than tree **B**.

Tree **B** is _____ than tree **A**.

12. **Read and draw.**


A set of 4 tins





5 sticks = _____

A symbol of an empty set _____

13. **Count and write.**

 = _____

 = _____

 = _____

14. **Answer correctly.**

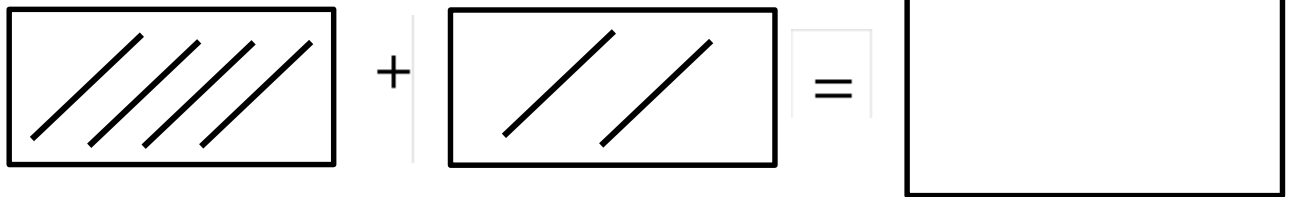
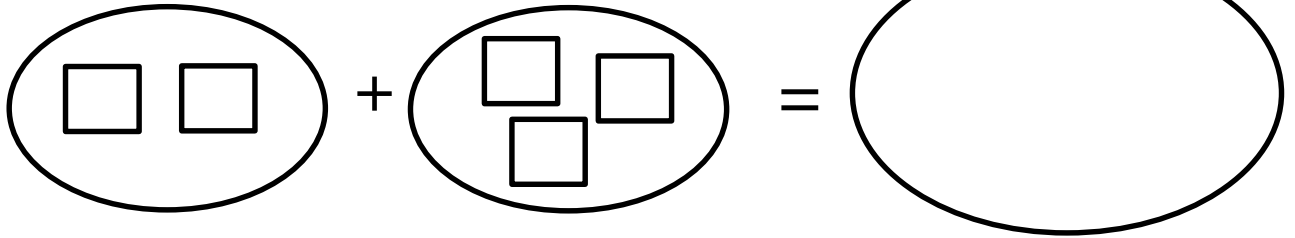
a. _____ days make a week.

b. Musa had 5 apples. His mother gave him 2 more apples.

How many apples does Musa have altogether?

c. 9 take away 6 equals _____.

15. Join these sets.







16. Write the number after.

0, 1

7,

2,

17. Study the graph and answer correctly.

Mary	
Musa	
Martin	
Mercy	

a. Who has 4 books?

b. _____ has the fewest number of books.

c. Who has the largest number of books?

d. How many books do they have altogether?

They have _____ books altogether.

18. Write in figures.

eight = _____ sixteen = _____

19. A child had eight books. If three books got lost, how many books remained?

20. Multiply:

$3 \times 2 =$ _____

$5 \times 2 =$ _____

THE END