

# MOTHERCARE PREPARATORY SCHOOLS

## ASSESSMENT WORK TERM II - 2020 (SET I)

### P.2 MATHEMATICS

Name: \_\_\_\_\_ Stream: \_\_\_\_\_

Branch: \_\_\_\_\_

1. Take away.

(a)  $7 - 7 =$  \_\_\_\_\_

(b)  $\begin{array}{r} \text{T} \quad \text{O} \\ 7 \quad 0 \\ - \quad 1 \quad 2 \\ \hline \end{array}$

\_\_\_\_\_

2. Write in words.

42 \_\_\_\_\_

$\frac{1}{3}$  \_\_\_\_\_

$\frac{1}{8}$  \_\_\_\_\_

3. Fill in the missing numbers.

(a) 620, \_\_\_\_\_, 622, 623, \_\_\_\_\_

(b) 630, 629, \_\_\_\_\_, 627, 626, \_\_\_\_\_

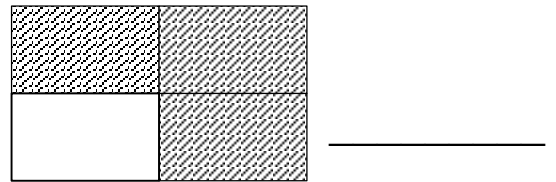
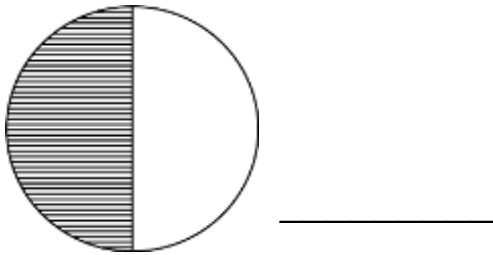
4. Workout:

$$\frac{1}{3} + \frac{1}{3} = \underline{\hspace{2cm}}$$

$$\frac{2}{9} + \frac{4}{9} + \frac{1}{9} = \underline{\hspace{2cm}}$$

5. Share 8 mangoes equally among 2 pupils. How many mangoes will each get?

6. Name the shaded fractions.



7. Multiply:    **T**    **O**

(a)    2    3

$$\begin{array}{r} \times \quad 2 \\ \hline \hline \end{array}$$

**T**    **O**

(b)    1    4

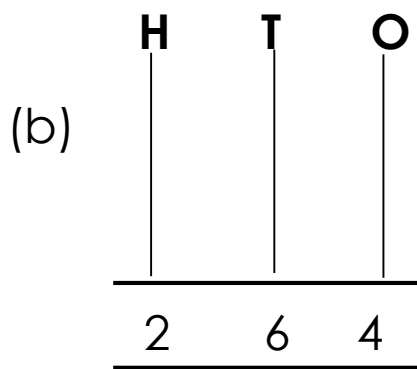
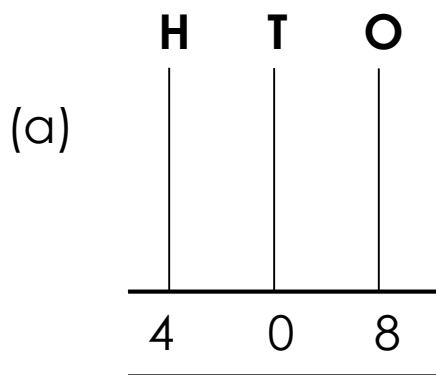
$$\begin{array}{r} \times \quad 2 \\ \hline \hline \end{array}$$

8. Complete correctly.

7 6 3    \_\_\_\_\_ Hundreds    \_\_\_\_\_ Tens    \_\_\_\_\_ Ones.

6 2    \_\_\_\_\_ Hundreds    \_\_\_\_\_ Tens    \_\_\_\_\_ Ones.

9. Draw beads to complete the abacii.



10. Draw sticks and bundles for.

26 = \_\_\_\_\_

42 = \_\_\_\_\_

09 = \_\_\_\_\_

11. **Read and answer.**

(a) Apio had 36 pots. Eight of them got broken.  
How many pots did she remain with?

(b) What is the sum of 25 and 4?

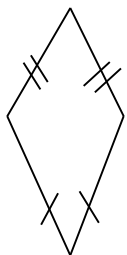
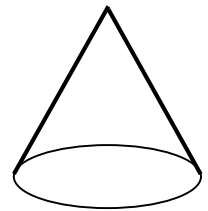
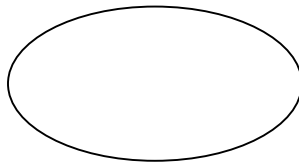
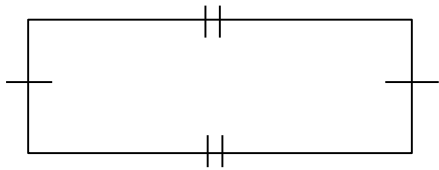
13. Circle the biggest number.

19, 16, 91

47, 49, 33

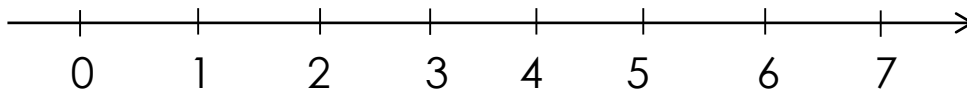
62, 26, 59

14. Name these shapes.

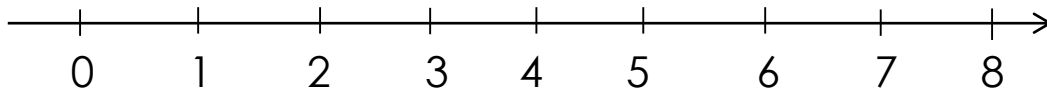


15. Workout using a numberline.

(a)  $6 - 4 =$  \_\_\_\_\_



(b)  $4 + 3 = \underline{\hspace{2cm}}$






16. Fill in the missing numbers.

(a)  $\square + 4 = 10$

(b)  $2 + \square = 5$

(c)  $4 - \square = 2$

17. Study the shopping list below and answer the following questions.

mango ( <b>sh. 700</b> ) 	tomato ( <b>sh. 200</b> ) 	onion ( <b>sh. 100</b> ) 
---	--	---

**Questions:**

(a) How much is a tomato?

(b) What is the difference between the cost of a mango and that of an onion?

(c) Work out the total money someone can spend on all items.

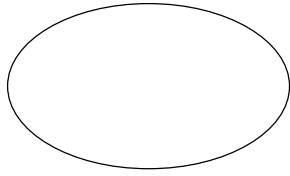
(d) \_\_\_\_\_ is the cheapest item.

(e) What is the most expensive item?


(f) Write in full.

shs. \_\_\_\_\_

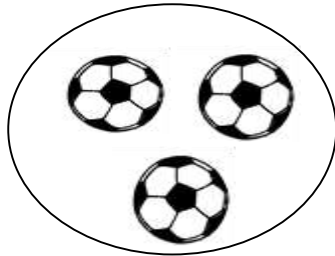
18. Name the set below.



\_\_\_\_\_



\_\_\_\_\_



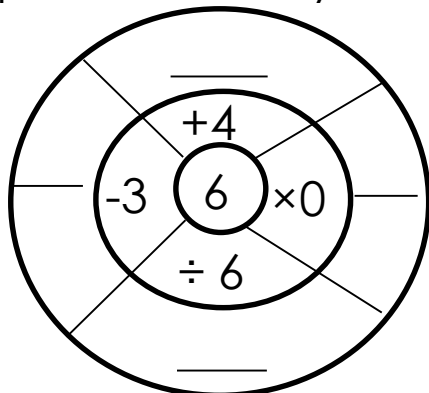
\_\_\_\_\_

19. What are:

3 tens = \_\_\_\_\_

4 two<sub>s</sub> = \_\_\_\_\_

20. Complete correctly.



**THE END**