

MOTHERCARE PREPARATORY SCHOOLS

ASSESSMENT WORK TERM II 2020 SET 1

PRIMARY THREE LITERACY 1A (SCIENCE)

Name: _____ Stream: _____

Branch: _____

SECTION A

1. Name one domestic animal that provides us with milk.

2. Give one thing moved by wind.

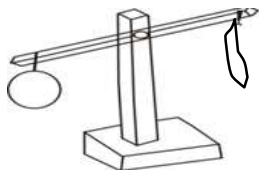
3. How do you keep your teeth clean?

4. Mention one basic need of a family.

5. Name one member of a nuclear family.

6. What term refers to the general cleanliness of a place where we live?

7. State this property of air drawn below.



8. Mention one product got from bees.

9. Which food value do we get from eating eggs?

10. Name one root crop grown in our sub-county.

11. Give one role of a mother in a home.

12. State one characteristic of a non-living thing.

13. What term is given to the study of living things and non-living thing?

14. How many legs has an insect?

15. Why do bees visit flowers?

16. When do farmers transplant their seedlings?

17. Name one body sense organ.

18. Name one insect eaten by people.

19. Give one way soil is formed.

20. Name one danger of too much sunshine.

21. Draw and name one thing made out of wood.

22. Why do animals move?

23. In which direction does the sun appear in the morning?

24. Which component of air supports burning?

25. Mention one way of promoting good sanitation in our classroom?

26. How does a fish move?

27. What covers the body of a bird?

28. Give one component of soil.

29. How many legs does a goat have?

30. Mention one activity children do during holidays.

31. What is the function of the tongue?

32. State one characteristic of a bird.

33. What are domestic animals?

34. Give one reason why First Aid is given to casualties before being taken to hospital.

35. How does a chameleon protect itself from enemies?

36. Name one product got from sheep.

37. Give the main natural source of heat and light.

38. How useful is a stevenson screen at a weather station?

39. Draw and name one item used for harvesting water.



40. Why do people eat food?

SECTION B

41.a) What are domestic birds?

b) Name two examples of domestic birds.

(i) _____ (ii) _____

c) How important are the feathers to a bird?

42.a) Mention two things used to manage rainy weather.

(i) _____ (ii) _____

b) Name the weather instrument shown below.



c) Underline the odd word out.

wind vane , rainfall , anemometer , hygrometer

43.a) What are living things?

b) State two characteristics of living things.


(i) _____ (ii) _____

c) Apart from animals, name one other group of living things.

44.a) Write down two crops grown in swamps.

(i) _____ (ii) _____

b) Name this plant commonly grown in dry rocky areas.



c) Why do people plant trees in their compounds?

45.a) What name is given to young plants?

b) Name the garden tool used for transplanting seedlings.

c) Write down two crops that are grown in a seed bed.

(i) _____ (ii) _____

46. Match correctly.

animal

lion

pig

bird

monkey

sound

chatters

roars

grunts

sings/whistles

Correct order

lion

pig

bird

monkey

47.a) State one characteristic of insects.

b) How are spiracles useful to a bee?

c) Apart from the head, name the other two main body parts of an insect.

(i) _____ (ii) _____

48.a) In one sentence, give the meaning of the term "air."

b) Which component of air is used in fire extinguisher?

c) State two components of air.

(i) _____ (ii) _____

49.a) Who is a farmer?

b) Draw and name three garden tools.

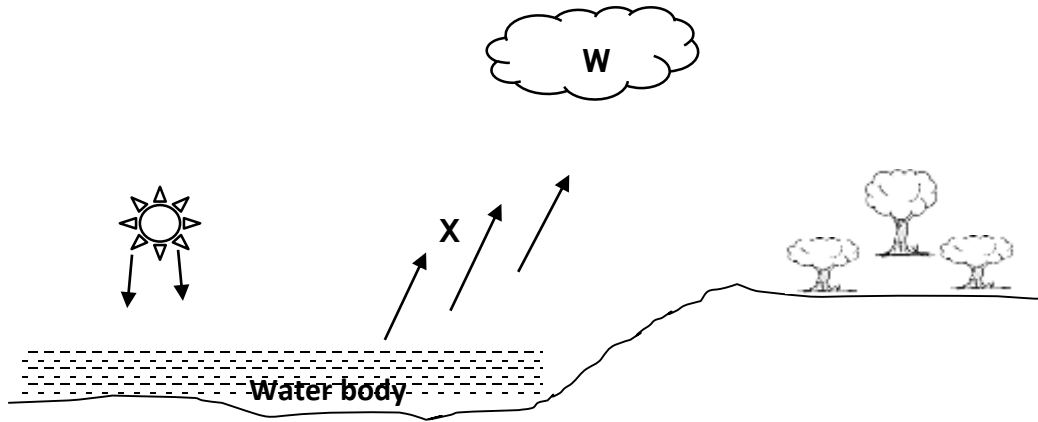
50.a) In one sentence, give the meaning of the term "soil."

b) Mention one type of soil.

c) State one use of soil to people.

d) Name one animal that lives in soil.

51. Use the diagram below and answer questions about it.



a) Name the process marked **X**.

b) Name part **W**.

c) Mention two uses of water to people.

(i) _____

(ii) _____

52.a) What name is given to tiny organisms that cause diseases?

b) Name one place where these organisms can be found.

c) Mention two examples of such organisms named in 52 (a) above.

(i) _____ (ii) _____

53.a) Give two ways of preserving fish.


(i) _____ (ii) _____

b) Name one type of fish.

c) Name the habitat for fish.

54.a) What is harvesting?

b) Name the three main parts of a plant shown below.



55.a) State one danger of too much sunshine.

b) Name two sources of light in the environment.

(i) _____ (ii) _____

c) Give one use of sunshine to people.

-End-