

**MOTHERCARE PREPARATORY SCHOOLS**  
**ASSESSMENT WORK TERM II 2020 SET I**  
**P.5 SOCIAL STUDIES**

NAME: \_\_\_\_\_ STREAM \_\_\_\_\_

BRANCH: \_\_\_\_\_

**SECTION A (40 MARKS)**


1. State the element of a good map used to interpret symbols on a map.

\_\_\_\_\_

2. How is Uganda similar to south to south Sudan in terms of their location?

\_\_\_\_\_

3. In the space below, draw a map symbol of a water fall.



4. How was Lake Kyoga formed?

\_\_\_\_\_

5. Name the mountain in Uganda whose peak is Margheritah.

\_\_\_\_\_

6. State the side of the mountain that receives rainfall.

\_\_\_\_\_

7. In which way are donkeys useful to people in hilly areas?

\_\_\_\_\_

8. Write CAO in full.

\_\_\_\_\_

9. Where does the sun appear to rise?

\_\_\_\_\_

10. Give any one cause of road accidents.

\_\_\_\_\_

11. Mention one product got from soft wood.

\_\_\_\_\_

12. State the type of a family where we find adopted children.  
\_\_\_\_\_
13. Under which government ministry is the Uganda Police?  
\_\_\_\_\_
14. What name is given to the line of longitude marked  $0^{\circ}$ ?  
\_\_\_\_\_
15. Give one way in which fish is preserved in Uganda.  
\_\_\_\_\_
16. What is a family?  
\_\_\_\_\_  
\_\_\_\_\_
17. State the type of natural vegetation which covers the largest parts of Uganda.  
\_\_\_\_\_
18. Give one way of locating places.  
\_\_\_\_\_
19. How did early man make use of a dog?  
\_\_\_\_\_
20. What title is given to the political head of a district?  
\_\_\_\_\_
21. To which direction does the compass rose point when at rest?  
\_\_\_\_\_
22. Why is a Stevenson screen painted white?  
\_\_\_\_\_
23. Write D.E.O in full.  
\_\_\_\_\_
24. Why are areas around Lake Victoria densely populated?  
\_\_\_\_\_
25. State one factor affecting the climate of Uganda.  
\_\_\_\_\_
26. Mention the largest ethnic group in Uganda.  
\_\_\_\_\_

27. How are maps similar to pictures?

---

28. What is a resource?

---

---

29. Mention any one social service center you know.

---

30. Which discovery enabled early man to live a settled life?

---

31. State the main economic activity carried out in the drier area of Uganda.

---

32. In which way was the Great Rift Valley formed?

---

33. State the main reason for the coming of the Arabs to Uganda?

---

34. How does the police keep law and order?

---

35. Which water body that joins Lake Edward and George?

---

**In questions 36-40, answer either Christianity or Islam but not both in a number.**

36. **Either:** Who led the Israelites out of Egypt?

---

**Or:** Which prophet is greatly known for his endurance?

---

37. **Either:** Mention the sacrament that enables a person to become a member of God's family.

---

**Or:** Which pillar of Islam encourages sharing?

---

39. **Either:** What was Jesus' first miracle?

\_\_\_\_\_

**Or:** Mention one miracle that was performed by Prophet Mohammad.

40. **Either:** What we call the three divine persons in one God?

\_\_\_\_\_

**Or:** What do we call the journey of Prophet Mohammad from Mecca to Medina?

**SECTION B (60MARKS)**

41. a. Why are most game parks found in savannah vegetation?

\_\_\_\_\_

b. Give any two factors that affect vegetation distribution.

(i) \_\_\_\_\_

(ii) \_\_\_\_\_

c. Which type of wood is got from planted vegetation?

\_\_\_\_\_

42. a. Mention any one type of lakes in Uganda.

\_\_\_\_\_

b. How are lakes useful to man?

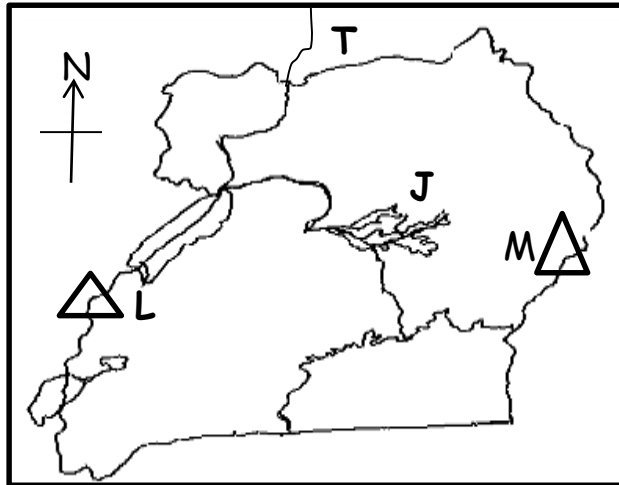
\_\_\_\_\_

c. What type of rainfall is received around water bodies?

\_\_\_\_\_

d. Name the lake in Uganda that is a source of salt.

43. a. Study the map below and answer questions about it.



a. Name the following features.

- (i) J \_\_\_\_\_
- (ii) L \_\_\_\_\_

b. Name the country marked T on the map.

\_\_\_\_\_

c. Use letter S to locate Kazinga channel on the map above.

44. a. Name the ethnic group that settled in the interlacustrine region.

\_\_\_\_\_

b. Apart from the above group, mention any other two ethnic groups in Uganda.

(i) \_\_\_\_\_

(ii) \_\_\_\_\_

c. How did the migration of ethnic groups into Uganda affect the population?

\_\_\_\_\_

45. a. Give the meaning of the following terms.

(i) Deforestation: \_\_\_\_\_

\_\_\_\_\_

(ii) Afforestation: \_\_\_\_\_

\_\_\_\_\_

b. Give two reasons why people carry out deforestation.

(i) \_\_\_\_\_

(ii) \_\_\_\_\_

46. a. Mention any one weather condition that calls for the use of an umbrella.

\_\_\_\_\_

b. Give any two weather elements.

(i) \_\_\_\_\_

(ii) \_\_\_\_\_

c. State the weather instrument that is used to measure the amount of rainfall received in an area.

\_\_\_\_\_

47. a. Mention any two minerals mined in Uganda.

(i) \_\_\_\_\_

(ii) \_\_\_\_\_

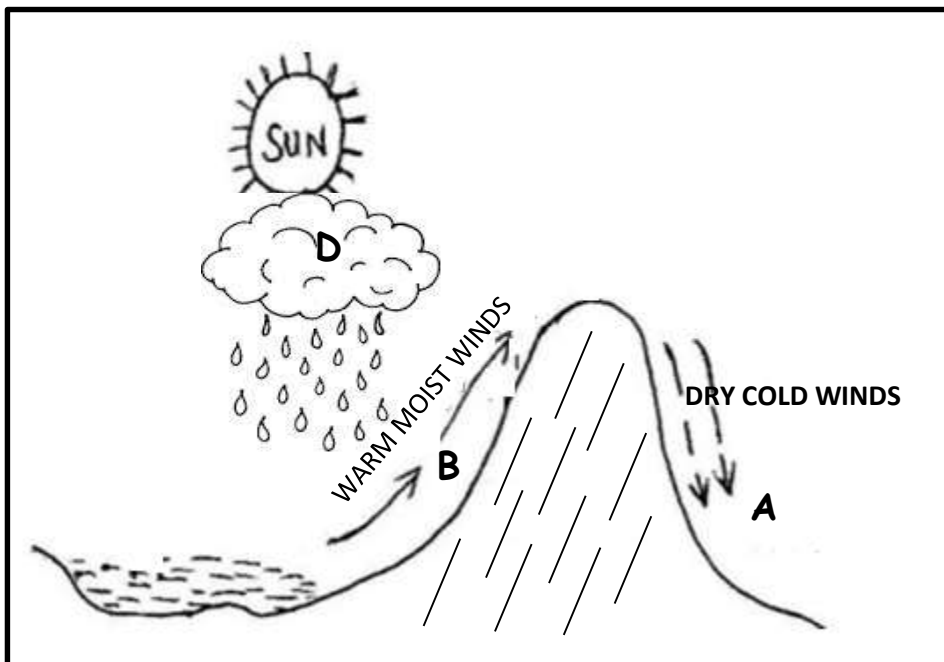
b. How is mining economically important to the people of Uganda?

\_\_\_\_\_

c. Give any one problem caused by mining in the environment.

\_\_\_\_\_

48. a. Study the diagram below and answer questions about it.



i. Name the side of the mountain marked

A \_\_\_\_\_ B \_\_\_\_\_

ii. Why does side A of the mountain receive little rainfall?

\_\_\_\_\_

iii. State the process that takes place at D.

\_\_\_\_\_

49. a. Match the raw material in List A to its product in list B.

| A            | B                   |
|--------------|---------------------|
| i. sugarcane | Tea leaves          |
| ii. Tobacco  | Medicine/cigarattes |
| iii. Tea     | Cotton wool         |
| iv. cotton   | sugar               |

Correct order

i. sugarcane \_\_\_\_\_

ii. tobacco \_\_\_\_\_

iii. tea \_\_\_\_\_

iv. cotton \_\_\_\_\_

50. a. Why did the missionaries come to Uganda?

\_\_\_\_\_

b. What type of education was introduced by the missionaries?

\_\_\_\_\_

c. A part from the missionaries, mention any two groups of foreigners that came to Uganda.

(i) \_\_\_\_\_

(ii) \_\_\_\_\_

For questions 51-55, answer either Christianity or Islam but not both in a number.

51. a. **EITHER:** Mention any three gospel books in the Bible.

(i) \_\_\_\_\_

(ii) \_\_\_\_\_

(iii) \_\_\_\_\_

b. How is the Bible important to Christianity?

\_\_\_\_\_

**OR:** Mention the Prophets who were given the following books in Islam;

(i) Injir \_\_\_\_\_

(ii) Tauret \_\_\_\_\_

(iii) Zabur \_\_\_\_\_

b. How is the Quran important to Muslims?

\_\_\_\_\_

52. a. **EITHER:** Mention any two miracles that were performed by Jesus.

(i) \_\_\_\_\_

(ii) \_\_\_\_\_

b. Why did Jesus perform miracles?

\_\_\_\_\_

c. Which miracle did Jesus perform at Cana?

\_\_\_\_\_

**OR:** Give any two miracles that Prophet Mohammed performed.

(i) \_\_\_\_\_

(ii) \_\_\_\_\_



b. Why did Prophet Mohammad run from Mecca to Medina?

---

c. State the meaning of the term Islam?

---

53. a. **EITHER:** What is a sacrament?

---

---

b. Mention any two sacraments that should be fulfilled by a Christian.

(i) \_\_\_\_\_

(ii) \_\_\_\_\_

c. Which sacrament enters a Christian to the family of God?

---

**OR:** What is Zakat?

---

b. Mention any two pillars of Islamic faith.

(i) \_\_\_\_\_

(ii) \_\_\_\_\_

c. Why should a Muslim pay zakat?

---

54.a. **EITHER;** What did Jesus Promise to his disciples?

---

b. Why did Jesus promise the above helper to his disciples?

---

c. Mention any two persons of the Holy Trinity.

(i) \_\_\_\_\_

(ii) \_\_\_\_\_

**OR:** What is saum?

---

b. How many days do Muslims fast during the month of Ramadhan?

---

c. Give any two reasons why Muslims fast.

(i) \_\_\_\_\_

(ii) \_\_\_\_\_

**55. BOTH**

a. Give any two similarities between Christianity and Islam.

(i) \_\_\_\_\_

(ii) \_\_\_\_\_

b. Mention any two ways in which Christians are different from Muslims.

(i) \_\_\_\_\_

(ii) \_\_\_\_\_

**\*THE END\***