

MOTHELCARE PREPARATORY SCHOOLS
REVISION WORK III - 2020
P.3 LITERACY B (S.S.T)

Name: _____ Stream: _____

WEEK ONE

Exercise 1

1. Which animal provides us with mutton?

2. An _____ is a sudden happening on the body which causes harm. (First Aid , accident)
3. State the importance of a dog in a home.

4. _____ is anything good to eat or drink.
5. Name the head teacher of your school.

6. Draw your school signpost in the space below.
7. Name any one group of people found at school.

8. What is the role of a family head?

9. What do we call a group of people related by blood, marriage or adoption?

10. Give any one need of a school.

Exercise 2

1. Why do we eat food?

2. Write any one element of weather.

3. How is a library important in a school?

4. What is a map?


5. Name any one physical feature in your area.

6. In which division is your school found?

7. Write any domestic bird which gives us eggs.

8. Give any one crop which grows well in a swampy area.

9. Draw a map of a tree in the space below.



10. Mention any one of the four major points of a compass.

Exercise 3

1. What is a community?

2. Name the physical feature that covers the largest part of your area.

3. Write one important place near your home.

4. List any one material used to build a permanent house.

5. Give any one source of water in your area.

6. Name the biggest fresh lake in Uganda.

7. Mention the highest mountain in Uganda.

8. Name any one symbol of a school.

9. What type of family do we find mother, father and their biological children?

10. Write the main work of police?

Exercise 4

1. Give any one element of a good map.

2. How is a doctor important in our community?

3. What do we call the state of being male or female?

4. Where do children go to learn?

5. Why do people give first aid?

6. _____ is the movement of people or goods from one place to another. (migration / transport)
7. Where does the pointer of a compass needle point when at rest?

8. Give any one animal which can be used for transport.

9. Name the man-made lake in Kampala.

10. Mention the main natural source of water?

Exercise 5

- 1.a) What are physical features?

 - b) Give two examples of physical features.
 - (i) _____
 - (ii) _____
 - c) Which physical feature covers the largest part of your area?

-
- 2.a) What are basic needs?

b) Name two examples of basic needs of man.

(i) _____

(ii) _____

3.a) What is a community?

b) Give two examples of members of a hospital community.

(i) _____

(ii) _____

WEEK TWO

Exercise 1

1.a) Write down the type of transport commonly used in our division / sub-county.

b) Give the two means of road transport.

(i) _____

(ii) _____

c) Name any one animal which can be used for transport.

2.a) What do we call the type of family where we find father, mother and their biological children?

b) Give the two types of family you know.

(i) _____

(ii) _____

c) Mention any one member of an extended family.

3.a) Mention one service children get from a school.

b) Which group of people works at school and promotes sanitation of the compound?

Exercise 2

1.a) Match people to their places of work.

Teacher Airport

Doctor Police station

Police man School

Pilot Hospital

Correct order

Teacher _____

Doctor _____

Police man _____

Pilot _____

2.a) Name any one pet animal kept at home.

b) Why do people keep domestic animals?

(i) _____

(ii) _____

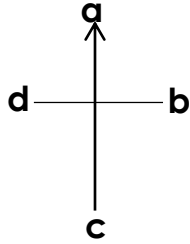
c) What are domestic animals?

3.a) State the use of a compass to a sailor.

b) Where does the pointer of a compass needle point when at rest?

Exercise 3

1. Name the following points of a compass below.



- a _____
b _____
c _____
d _____

2.a) What is weather?

b) Give any three elements of weather.

(i) _____

(ii) _____

(iii) _____

3.a) What is gender?

b) Give one role of children at home.

Exercise 4

1.a) Which lake in Uganda is a source of salt?

b) How are lakes important to people who live near them?

(i) _____

(ii) _____

(iii) _____

2. Match A with B correctly.

A

- a) School bursar
- b) Security guard
- c) Teacher
- d) Cook

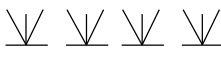
B

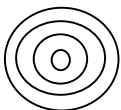
- teaches pupils in class
- collects school fees
- cooks foods
- provides security at school

Correct order

- a) School bursar _____
- b) Security guard _____
- c) Teacher _____
- d) Cook _____

3. Name the following map symbols.

(a)  _____

(b)  _____

Exercise 5

1. What are physical features?

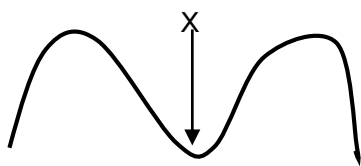
2. Mention any three examples of physical features in Uganda.

i) _____ ii) _____

iii) _____

3. Which physical feature covers the largest part of our division?

4. Name the physical feature below.



x _____

5. What is a swamp?

6. Mention any two crops which grow well in swampy areas.

i) _____ ii) _____

7. How is a swamp useful to the people who make crafts.

8. Match the following correctly.

Tribes

Baganda

Iteso

Bagishu

Batooro

Acholi

Banyankole

Languages

Acholi

Runyankole

Luganda

Ateso

Lugishu

Rutooro

Correct order

Baganda _____

Iteso _____

Bagishu _____

Batooro _____

Acholi _____

Banyankole _____

9. Name one tool that is used to keep peace.

10. Which language is commonly used at school in urban areas?

WEEK THREE

Exercise 1

1. What is culture?

2. Mention any three things which show people's culture.

i) _____

ii) _____

iii) _____

3. What is transport?

4. Give any three types of transport in our division.
- i) _____ ii) _____
- iii) _____
5. Where is the international airport of Uganda found?
- _____
6. What is the name of our;
- i) division / Town council _____
- ii) parish _____
7. Write the following in full.
- a) K.C.C.A : _____
- b) U.P.E : _____
- c) L.C : _____
- d) BOU : _____

Exercise 2


1. What is a map?
- _____
2. Mention any three elements of a good map.
- i) _____ ii) _____
- iii) _____
3. In which direction does the sun appear to
- i) rise from _____
- ii) set in _____
4. How is a dog important at home?
- _____
5. Name one example of a legend in Uganda.
- _____

6. Give any two examples of lakes in Uganda.
i) _____ ii) _____
7. In which season do people harvest ready crops?

8. Give any two groups of people who work at school.
i) _____ ii) _____

Exercise 3

1. Name your school?

2. Draw two things found at your school.

3. Name three colours which make up your uniform.
i) _____ ii) _____
iii) _____
4. What are economic activities?

5. Give any four examples of activities do to get money.
i) _____ ii) _____
iii) _____ iv) _____
6. Why do people go to markets?

7. What is a community?

8. Give any three examples of communities in our division.

i) _____ ii) _____

iii) _____

Exercise 4

1. Who is a child?

2. Give four examples of children's rights you know.

i) _____

ii) _____

iii) _____

iv) _____

3. What are customs?

4. Mention four examples of customs you know.

i) _____

ii) _____

iii) _____

iv) _____

5. Which tribe practices circumcision as its culture?

6. What is marriage?

7. Outline two types of marriage you know.

i) _____

ii) _____

8. What is food?

9. Mention three places where people can get food from.

- i) _____ ii) _____
iii) _____

Exercise 5

1. What is a staple food?

2. Mention the staple food for the following people.

Baganda

Basoga

- i) _____ i) _____

3. What is dowry?

4. Mention any three gifts paid as dowry.

- i) _____ ii) _____

iii) _____

5. Name one crop used to make cloth.

6. What is child abuse?

7. State two causes of child abuse.

i) _____

ii) _____

8. Give any two ways how we can prevent child abuse.

i) _____

ii) _____

-End-