

**MOTHERCARE PREPARATORY SCHOOLS**  
**REVISION WORK III - 2020**  
**P.3 LITERACY A (SCIENCE)**

Name: \_\_\_\_\_ Stream: \_\_\_\_\_

**WEEK ONE**

**Exercise 1**

1. Name one thing made out of wood.

\_\_\_\_\_

2. Mention one way a P.3 child can keep his hair clean.

\_\_\_\_\_

3. Which animal provides people with honey?

\_\_\_\_\_

4. Name the clouds that provide us with rain.

\_\_\_\_\_

5. Give one basic need of people.

\_\_\_\_\_

6. Name the object below which is made out of clay soil.



\_\_\_\_\_

7. Why do we brush our teeth regularly?

\_\_\_\_\_

8. Name one body building food eaten at home.

\_\_\_\_\_

9. Give one animal found in the zoo.

\_\_\_\_\_

10. Mention one natural change in the environment.

\_\_\_\_\_

## **Exercise 2**

1. Name the mouth part of a bird.

---

2. In which season do farmers weed their crops?

---

3. Give one component of soil.

---

4. Name one item used to build permanent houses.

---

5. Where do we get clay soil from?

---

6. Name one school symbol.

---

7. Give one group of people who keep peace and security.

---

8. What is science?

---

9. Name one thing used to harvest water at home.

---

10. Name the habitat for the animal drawn below.



---

## **Exercise 3**

1. Mention the food value got from eating fish.

---

2. Write any one type of weather.

---

3. What do we call the general cleanliness of the body and the things we use?

---

4. Name one animal used for transport.

---

5. Circle the odd word out.

fish , tree , stone , cow

6. State one property of air.

---

7. How do birds reproduce?

---

8. Name one example of a plant.

---

9. What is the work of a bursar at school?


---

10. Why is loam soil dark in colour?

---

#### **Exercise 4**

1. In the space below draw a broom.



2. From which direction does the sun appear?

---

3. What are domestic animals?

---

4. Name one natural source of water.

---

5. Which body part do people use for chewing food?

---

6. Name one thing found in a First Aid box.

---

7. Why do we brush our teeth after eating food?

---

8. Mention one common disease at home.

---

9. How is a hoe useful to a farmer?

---

10. Name the body part used for hearing.

---

### **Exercise 5**

1.a) What are living things?

---

b) Name any two examples of living things.

(i) \_\_\_\_\_ (ii) \_\_\_\_\_

c) State one characteristic of living things.

---

2.a) Mention any two sources of water.

(i) \_\_\_\_\_ (ii) \_\_\_\_\_

b) Give two uses of water at home.

(i) \_\_\_\_\_ (ii) \_\_\_\_\_

3.a) What term is used to mean a sudden happening that can cause harm to the body?

---

c) State one effect of accidents to the body.

\_\_\_\_\_

## WEEK TWO

### Exercise 1

1.a) State two uses of water to people.

(i) \_\_\_\_\_

(ii) \_\_\_\_\_

b) Give two things got from lakes.

(i) \_\_\_\_\_ (ii) \_\_\_\_\_

2.a) What is a family?

\_\_\_\_\_

b) Name two members found in a nuclear family.

(i) \_\_\_\_\_ (ii) \_\_\_\_\_

c) Give one role of a father in a home.

\_\_\_\_\_

3.a) What do we call the vertical arrangement of soil layers?

\_\_\_\_\_

b) State one use of soil to people.

\_\_\_\_\_

### Exercise 2

1. Name the young ones of these animals.

fish \_\_\_\_\_

snake \_\_\_\_\_

dog \_\_\_\_\_

cow \_\_\_\_\_

2.a) Name two immunisable diseases.

(i) \_\_\_\_\_ (ii) \_\_\_\_\_

b) Mention two sites of immunization.

(i) \_\_\_\_\_ (ii) \_\_\_\_\_

3.a) What are natural changes?

\_\_\_\_\_

b) Name one man made change.

\_\_\_\_\_

### **Exercise 3**

1.a) What is wind?

\_\_\_\_\_

b) State two importance of wind.

(i) \_\_\_\_\_ (ii) \_\_\_\_\_

c) Which component of air supports burning?

\_\_\_\_\_

2.a) Draw and name two examples of non-living things.


b) Mention two characteristics of non-living things.

(i) \_\_\_\_\_ (ii) \_\_\_\_\_

## **Exercise 4**

1.a) State two qualities of a good First Aider.

(i) \_\_\_\_\_ (ii) \_\_\_\_\_

b) Why do we give First Aid to casualties?

\_\_\_\_\_

c) How useful is spirit in giving First Aid?

\_\_\_\_\_

2.a) What is wind?

\_\_\_\_\_

b) Which component of air supports burning?

\_\_\_\_\_

3.a) Match correctly.

**A**

Clay soil

Loam soil

Sand soil

**B**

for building

for making pots

for growing crops

**Correct order**

Clay soil

\_\_\_\_\_

Loam soil

\_\_\_\_\_

Sand soil

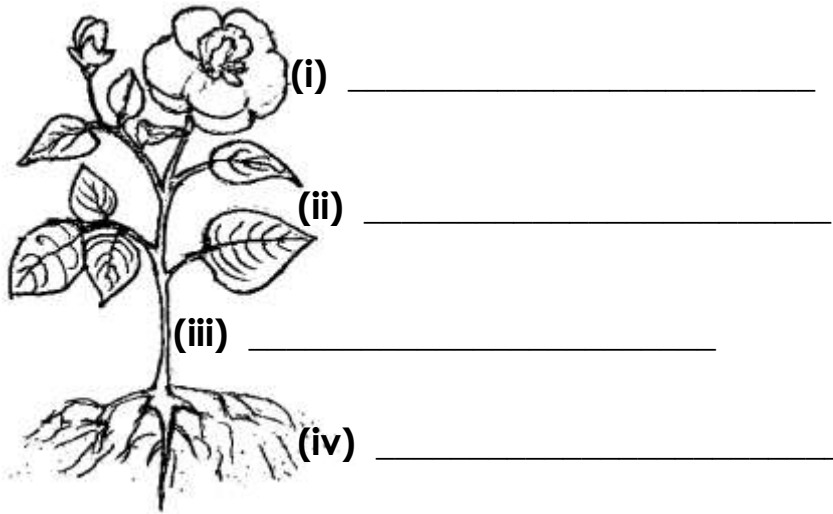
\_\_\_\_\_

b) What is soil erosion?

\_\_\_\_\_

## Exercise 5

1. Name the four parts of a flowering plant.



## WEEK THREE

### Exercise 1

1. Give one example of a living thing.

\_\_\_\_\_

2. Write two groups of living things.

(i) \_\_\_\_\_

(ii) \_\_\_\_\_

3. In which direction does the sun;

(i) appear from \_\_\_\_\_

(ii) disappear \_\_\_\_\_

3. Name two things made by a carpenter

(i) \_\_\_\_\_

(ii) \_\_\_\_\_

Write two uses of the sun to people.

(i) \_\_\_\_\_

(ii) \_\_\_\_\_



4. Give one component of air.

---

## **Exercise 2**

1. How does a bird move?

---

2. Mention two ways of promoting sanitation in our classroom.

i) \_\_\_\_\_

ii) \_\_\_\_\_

3. Which component of air supports burning?

---

4. What covers the body of birds?

---

5. Name the young ones of these animals.

**Animal**

**Young one**

cow

---

pig

---

sheep

---

cat

---

6. What is humus?

---

## **Exercise 3**

1. Name one thing made out of clay.

---

2. What does a fish use for breathing?

---

3. Give one process of soil formation.

---

4. How many legs does a bird have?

---

5. State two ways of keeping our body clean.

i) \_\_\_\_\_

ii) \_\_\_\_\_

6. Mention two components of air

i) \_\_\_\_\_

ii) \_\_\_\_\_

7. What name is given to animals kept at home?

\_\_\_\_\_

8. Mention two examples of wild animals.

i) \_\_\_\_\_ ii) \_\_\_\_\_

9. Mention two examples of water harvesters.

i) \_\_\_\_\_

ii) \_\_\_\_\_

### **Exercise 4**

1. What are non-living things?

i) \_\_\_\_\_

ii) \_\_\_\_\_

2. Mention two groups of living things.

i) \_\_\_\_\_

ii) \_\_\_\_\_

3. How does a chameleon protect itself from enemies?

\_\_\_\_\_

4. Apart from honey, give one product got from bees.

\_\_\_\_\_

5. What are living things?

\_\_\_\_\_

6. Name the animal which provides us with these products.

**Product**

**animal**

beef

\_\_\_\_\_

pork

\_\_\_\_\_

mutton

\_\_\_\_\_

**Exercise 5**

1. Give one component of soil.

\_\_\_\_\_

2. Mention two reasons why people keep animals.

i) \_\_\_\_\_

ii) \_\_\_\_\_

3. How useful are spiracles to a bee?

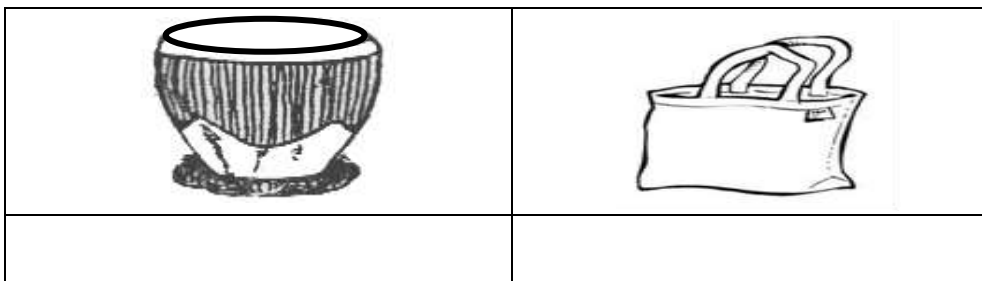
\_\_\_\_\_

4. State two elements of weather

i) \_\_\_\_\_

ii) \_\_\_\_\_

5. Name these things made out of skins and hides.



6. What do we call the mouth part of a bird?

\_\_\_\_\_

7. Give two components of soil.

(i) \_\_\_\_\_

(ii) \_\_\_\_\_

**-End-**