

# MOTHERCARE PREPARATORY SCHOOLS

REVISION WORK TERM I - 2020

SOCIAL STUDIES WITH RELIGIOUS EDUCATION

Time Allowed: 2 Hours 15minutes

Index No:

Random No.					Personal No.		

Candidate's Name: .....

Candidate's Signature: ..... Stream: .....

School Random No. : .....

District ID: .....

### READ THE FOLLOWING INSTRUCTIONS CAREFULLY

1. The paper has **two** sections: **A** and **B**.
2. Answer all questions. All answers to both sections A and B must be written in the spaces provided.
3. **All** answers must be written using a blue or black ball-point pen or fountain pen.
4. Un necessary changes of work may lead to loss of marks.
5. Any handwriting that cannot easily be read may lead to loss of marks.
6. Do not fill anything in boxes indicated: "**For Examiners' Use only**" and those inside the question paper.

FOR EXAMINERS' USE ONLY			
SECTION	EXRS MARKS	T/L MARKS	OFFICE
A			
B			
TOTAL			

**SECTION A (40 MARKS)**

1. Which element of a map explains map symbols?

.....

2. Give any one way children show respect to their parents at home.

.....


3. How is the government of Uganda controlling rural urban migration today?

.....

4. State any one method that was used by Africans to demand for self-rule.

.....

5. Draw any one of the mass media means of communication in the space below.



6. Name the missionary that introduced vocational education in Uganda.

.....

7. How was the **IBEACO** helpful to the Christian missionaries in East Africa?

.....

8. Of what importance are lines of latitude and longitude in map reading?

.....

9. Why are most industries in Uganda established in areas with a high population?

.....

10. Name the railway line that connects Zambia to Port Dar-es-Salaam.

.....

11. State any one way insecurity is a problem to developing countries.  
.....
12. What does the Kob signify on the Uganda Coat of Arms?  
.....
13. Write any one importance of farming to East African countries.  
.....
14. Give any one benefit of East African Community to member states.  
.....
15. Why is it a policy in Uganda to carry out population census after ten years?  
.....
16. Name any one area in Africa where crude oil is mined on a large scale.  
.....
17. Give one advantage of having a Post Office in a district.  
.....
18. How is the Great Man Made River useful to Libya's economy?  
.....
19. State the social reason why the British constructed the Uganda railway.  
.....
20. Why does the government of Uganda encourage the use of family planning?  
.....

21. Which economic activity was introduced by the colonialists in Kenya highlands?  
.....
22. State one role played by the Secretariat of the East African Community.  
.....
23. Why do oceans and seas have salty waters?  
.....
24. Give one reason why crop farmers in hilly areas terrace their land.  
.....
25. Why does **NEMA** encourage people to conserve the existing wetlands?  
.....
26. Name the physical feature in South Africa that was formed by folding of rocks.  
.....
27. What role did Sir Gerald Portal play in the colonization of Uganda?  
.....
28. Why was Africa known as a "Dark continent" by the Europeans?  
.....
29. Give the reason why the Electoral Commission organizes by - elections?  
.....
30. State one reason why the school should be at good terms with the neighbours.  
.....

31. Name the tool early man used to chop meat into small pieces.  
.....

32. What is the effect of the Mozambique Ocean current on Africa's climate?  
.....

33. State one way the government of Uganda is trying to promote literacy.  
.....

34. Give one reason why the government is expanding roads in urban areas.  
.....

35. Why does the government collect taxes from the citizens?  
.....

**For questions 36–40, answer Either Christianity Or Islamic but not both.**

36. **Either:** In which way was the death of Jesus Christ important to Christians?  
.....

**Or:** How is death important to a good Muslim?  
.....

37. **Either:** Why do Christians give offertory in Church?  
.....

**Or:** Why do Moslems give zakat?  
.....

38. **Either:** Name the son of Jacob who was sold to Egypt by his brothers.  
.....

**Or:** Name the prophet who is known for rescuing Allah's people from Egypt.  
.....

39. **Either:** Mention one religion that existed in Uganda before the introduction of Christianity.

.....

**Or:** Mention the first foreign religion to be introduced in Uganda.

.....

40. **Either:** Why did Mary and Joseph go with Baby Jesus to Egypt?

.....

**OR:** Why did Prophet Muhammad go to Taif?

.....

**SECTION B (60 MARKS)**

41. a) Mention any one natural component of the environment.

.....

b) Give two ways of conserving resources in the environment.

i) .....

ii) .....

c) Write **NFA** in full.

.....

42. a) Mention the trade organization in which the traders crossed Sahara desert.

.....

b) Write any two trade items that were got from West Africa in the above trade.

i) .....

ii) .....

c) Why did the Traders in the above trade organization move in caravans?

.....

43. a) What term is used to mean the violation of children's rights?

.....

(b) State two forms of child neglect in Uganda today

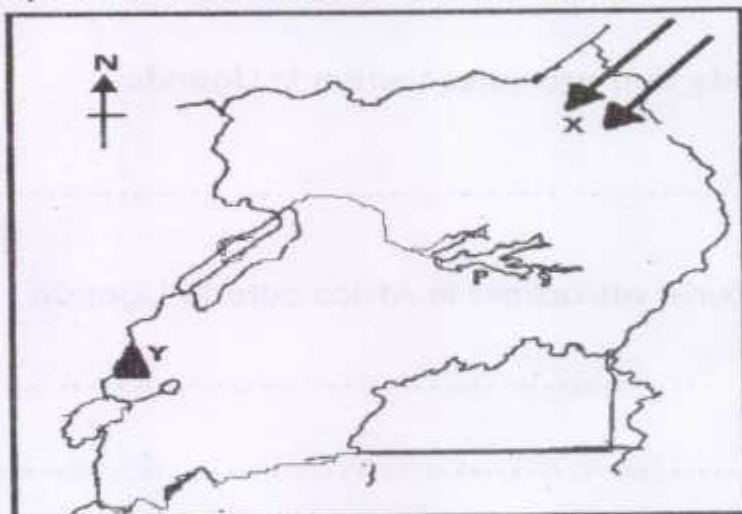
(i) .....

(ii) .....

(c) Why should children be educated about their rights?

.....

44. Study the map below and answer the questions that follow.



(a) Name any one tribe under the ethnic group that entered through route X.

.....

(b) Why is the Mountain peak marked Y snowcapped throughout the year?

.....

(c) Mention the direction of Mountain Y from Lake P.

.....

(d) Give one reason why lake marked P is shallow.

.....

45. (a) Mention the earliest ethnic group to come to East Africa.

.....

(b) State any two causes of early ethnic migrations in Africa.

i) .....

ii) .....

(c) Why did the Ngoni migrate from South Africa?

.....

46. (a) Name the body that promotes tourism in Uganda

.....

b) State any two tourist attractions in Africa outside Uganda

(i) .....

(ii) .....

(b) Why does the government of Uganda create more game reserves?

.....

47. (a) State any one organ of a democratic government besides the Parliament.

.....

(b) Why should every democratic country have a Parliament?

.....



(c) What is the work of the following officials in the Parliament?

i) Sergeant-at-arms.  
.....  
.....

ii) Clerk to Parliament.  
.....  
.....

48. (a) What is meant by the term **Great Trek**?

.....  
.....

(b) Give one cause of the Great Trek.  
.....  
.....

(c) Mention any two effects of the Great Trek.

(i) .....

(ii) .....

49. Match the types of climate to the famous economic activities carried out there;

**A: Types of climate**

**B: Economic activity**

(a) Mediterranean

Plantation farming

(b) Temperate

Citrus fruit growing

(c) Equatorial

Tourism

(d) Tropical

Rearing of Merino sheep

(a) Mediterranean .....

(b) Temperate .....

(c) Equatorial .....

(d) Tropical .....

50. (a) Name any one of the industrialized towns in Uganda today.


.....

b) State two factors that promote industrialization in an area.

(i) .....

(ii) .....

c) Draw a symbol of a factory in the space below.



**For questions 51- 54, answer Either Christianity or Islam but not BOTH.**

51. **Either:** (a) Write any two religious denominations in Uganda today.

(i) .....

(ii) .....

(b) Give any two ways religions cater for the bodily needs of the people.

(i) .....

(ii) .....

**OR:** (a) Write any two religious denominations in Uganda today

(i) .....

(ii) .....

(b) Give any two ways religions cater for the bodily needs of the people.

i) .....

ii) .....

52. **Either:** (a) State two reasons why Christians should care for God's creations.

(i) .....

(ii) .....

(b) Mention any two ways of caring for God's creations.

(i) .....

(ii) .....

**OR:** (a) Mention two reasons why Muslims should care for Allah's creations.

(i) .....

(ii) .....

(b) Give two ways of caring for Allah's creations.

(i) .....

(ii) .....

**53. Either:** a) State any two ways Abraham demonstrated his faith to God.

(i) .....

(ii) .....

(b) Name the son of Abraham that he accepted to sacrifice to God.

.....

(c) Give one way of showing our faith to God.

.....

**Or:** a) Mention two ways prophet Ibrahim showed his faith to Allah.

(i) .....

(ii) .....

(b) Name the son of prophet Ibrahim that he wanted to sacrifice to Allah.

.....

(c) Give one way of showing our faith to Allah.

.....

**54. Either:** a) What event took place on Pentecost day?

.....

b) In which two ways was the Holy Spirit important to the Apostles?

(i) .....

(ii) .....

c) State any one symbol of the Holy Spirit.

.....

**OR:** a) Differentiate between Iman and Imam.

.....

.....

b) Mention any two pillars of Islam.

(i) .....

(ii) .....

d) What role is played by the Muezzin in Islam?

.....

**55. FOR BOTH CANDIDATES:**

(a) Mention the type of marriage that is officiated by a religious leader?

.....

(b) Give any two qualities of a good marriage partner.

(i) .....

(ii) .....

(c) Write any one reason why Christians/Muslims marry

.....

**END**