

MOTHERCARE PREPARATORY SCHOOLS
REVISION WORK 2020
P.3 LITERACY B (S.S.T)

Name: _____ Stream: _____

WEEK 1

Exercise 1

1. What is the name of your school?

2. What is a school?

3. Who heads a school?

4. Give three symbols of a school.
(i) _____ (ii) _____
(iii) _____
5. Write the motto of your school _____
6. What is environment?

7. Mention any two things found in our environment.
(i) _____ (ii) _____
8. What is a community?

9. Give three examples of communities.
(i) _____
(ii) _____
(iii) _____
10. What is a home?

11. Write down any two activities done by children at home.
(i) _____ (ii) _____

Exercise 2

1. What are domestic animals?

2. Mention any three examples of domestic animals.

(i) _____ (ii) _____

(ii) _____

3. How can people care for domestic animals?

4. What are wild animals?

5. Mention any three examples of wild animals.

(i) _____ (ii) _____

(ii) _____

6. Write S.ST in full.

7. What is the main natural source of light?

8. What is the name of the Director of our school?

9. Name the capital city of Uganda?

10. Why do children go to school every day?

11. People rear cows for _____ and _____.

(beef, mutton, milk)

Exercise 3

1. What are basic needs?

2. Mention any two examples of basic needs.

(i) _____ (ii) _____

3. Why is food called a basic need?

4. What is social studies?

5. Write social studies in short.

6. State the use of a dog at home?

7. Which school symbol is used for identification of a school child?

8. How is water useful at home? (Give three uses)

(i) _____

(ii) _____

(iii) _____

9. What is transport?

10. Mention any three types of transport in your area.

(i) _____ (ii) _____

(ii) _____

Exercise 4

1. What is the name of your division /Sub County?

2. In which parish/ ward is your school found?

3. In which village/zone is your school found?

4. In which district is your school found?

5. Mention any three important places in our division/Sub County.

(i) _____ (ii) _____

(iii) _____

6. What is a family?

7. Mention any two types of families.

(i) _____

(ii) _____

8. Give two people who start up a family.

(i) _____

(ii) _____

9. How are the following people important in a family?

(i) father _____

(ii) mother _____

10. How do you call the mother of your father?

- | | |
|-------------|---------------------------------------------|
| b. hospital | a place where Muslims go for prayers. |
| c. market | a place where Christians go for prayers. |
| d. church | a place where people go to learn. |
| e. mosque | a place where sick people go for treatment. |

Correct order

- | | |
|-------------|-------|
| a. school | _____ |
| b. hospital | _____ |
| c. market | _____ |
| d. church | _____ |
| e. mosque | _____ |

9. Why do people and animals move from one place to another?

10. **Match the following correctly.**

- | | | |
|-----------------|---|---------------------------|
| a. school | - | mayor |
| b. country | - | kabaka |
| c. family | - | president |
| d. municipality | - | headmaster / headmistress |
| e. kingdom | - | father |

Correct order

- | | | |
|-----------------|---|-------|
| a. school | - | _____ |
| b. country | - | _____ |
| c. family | - | _____ |
| d. municipality | - | _____ |
| e. kingdom | - | _____ |

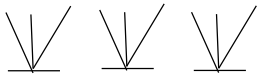
WEEK 2


Exercise 1

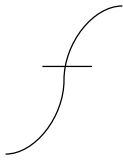
1. What are map symbols?

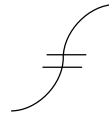
2. How are map symbols useful on the map?

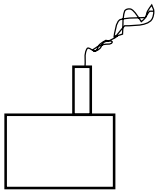
3. Name the following map symbols drawn below.



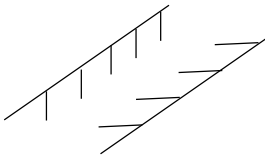




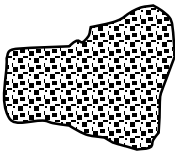


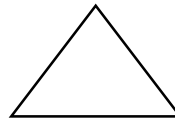


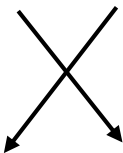














Exercise 2

1. What are physical features?

2. Give four examples of physical features in your area.

(i) _____ (ii) _____
(iii) _____ (iv) _____

3. Which physical feature covers the largest part of your sub-county?

4. Give two examples of lakes in Uganda.

(i) _____ (ii) _____

5. Which lake provides people with salt in Uganda?

6. What is a swamp?

7. Give three crops which grow well in swamps.

(i) _____ (ii) _____
(iii) _____

8. Which is the longest river in Uganda?

9. Give three uses of lakes and rivers to people.

(i) _____
(ii) _____
(iii) _____

10. Which is the highest mountain in Uganda?

Exercise 3

1. In which direction does the sun rise/appear?

2. In which direction does the sun set/disappear?

3. Who is a pilot?

4. Which element of a good map interprets map symbols?

5. Name the man-made lake in Kampala district.

6. Which type of soil is got from swamps and its used for making pots?

7. Write U.P.E in full.

8. What are semi-cardinal points of a compass?

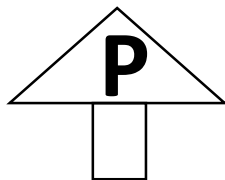
9. Give any three examples of semi-cardinal points of a compass.


(i) _____ (ii) _____

(iii) _____

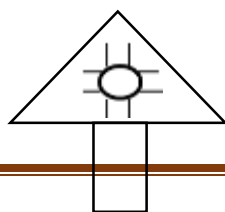
10. Name the road signs below.

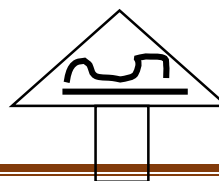
a.





b.





Exercise 4

1. Which type of fish is commonly caught from swamps?

2. Give one thing made from hides and skins.

3. Name the International Airport of Uganda.

4. How many colours does the Uganda flag has?

5. Name the Uganda flag colours.

(i) _____ (ii) _____

(iii) _____

6. Which bird is found in the middle of the Uganda flag?

7. How are trees useful in our school compound?

8. What are economic activities?

9. Mention any three examples of economic activities in your area.

(i) _____ (ii) _____

(iii) _____

10. Identify three items/things made from clay soil.

(i) _____ (ii) _____

(iii) _____

Exercise 5

1. What is a plateau?

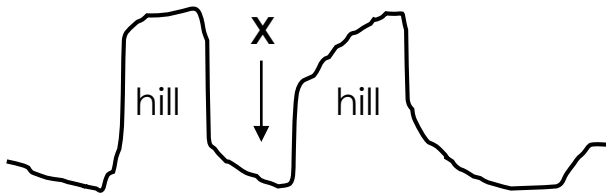
2. Define a hill.

3. Mention any three examples of hills found in Kampala.

(i) _____ (ii) _____

(iii) _____

4. Name the landform marked with letter X below.



X _____

5. **Draw the map symbols for the following;**

a. mountain

b. permanent lake

c. stone quarry

d. church

e. river

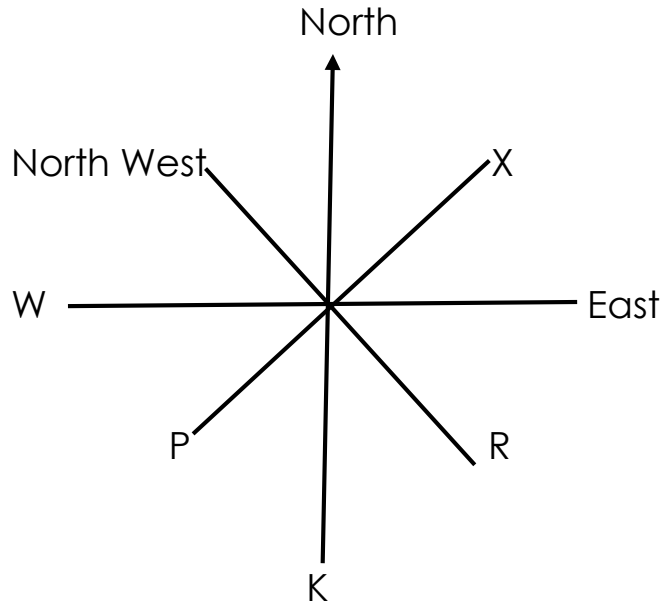
f. dam

6. Which type of transport is used on lakes and rivers of Uganda?

WEEK 3

Exercise 1

1. Name the following compass points below.



- X = _____
- R = _____
- K = _____
- P = _____
- W = _____

2. Which semi-cardinal is between south and East?

3. Give three groups of people who use the compass in their daily work.

(i) _____ (ii) _____

(iii) _____

7. State the work of a veterinary doctor in our community.

Exercise 2

1. Name the ethnic group in your sub-county.

2. What is a tribe?

3. Mention three example of tribes found in our sub county.

(i) _____ (ii) _____

(iii) _____

4. Mention the tribes that speak the following languages.

(i) Luganda _____

(ii) Lusoga _____

(iii) Runyoro _____

(iv) Ateso _____

(v) Lugisu _____

5. What is language?

6. Name the commonest language spoken in schools and offices in Uganda.

7. What is culture?

8. Mention any four things that determine/make people's culture.

(i) _____

(ii) _____

(iii) _____

(iv) _____

Exercise 3

1. What are customs?

2. Mention three examples of customs in your area.

(i) _____ (ii) _____

(iii) _____

3. What are bride-price?

4. Mention any three things paid/given as bride price.

(i) _____ (ii) _____

(iii) _____

5. What is marriage?

6. Give any two types of marriage in your area.

(i) _____ (ii) _____

7. Define a staple food.

8. Mention any two examples of staple food.

(i) _____ (ii) _____

9. **Match the following dances with their tribes.**

Dances

Tribes

(i) Bakisimba and Nankasa

Banyoro

(ii) Imbalu and Kadodi

Basoga

(iii) Arakaraka

Baganda

(iv) Runyege

Bagisu

(v) Irongo and Tamena Ibuga

Acholi

Correct order

(i) Bakisimba and Nankasa

(ii) Imbalu and Kadodi

(iii) Arakaraka

(iv) Runyege

(v) Irongo and Tamena Ibuga

Exercise 4

1. What is weather?

2. Mention any three types/conditions of weather.

(i) _____ (ii) _____

(iii) _____

3. Give any three elements of weather.

(i) _____ (ii) _____

(iii) _____

4. Name the crop used to make cloth.

5. Which traditional practice is done by the Bagisu?

6. Which weather instrument is used to measure the amount of rainfall received in an area?

7. **Match the following correctly.**

- | | | |
|---------------------|---|---------------------|
| a. Baganda men | - | Gomesi |
| b. Banyankole women | - | Beads around waists |
| c. Baganda women | - | Kanzu |
| d. Karimajong | - | Sash or Mushanana |

Correct order

- | | | |
|---------------------|---|-------|
| a. Baganda men | - | _____ |
| b. Banyankole women | - | _____ |
| c. Baganda women | - | _____ |
| d. Karimajong | - | _____ |

Exercise 5

1. What are legends?

2. Mention any three examples of legends.

(i) _____ (ii) _____

(ii) _____

3. Who was the First Maganda on earth?

4. Name the two brothers of Nambi.

(i) _____ (ii) _____

5. Mention the first Bagisu on earth.

6. What is a clan?

7. Name any two symbols of a clan.

(i) _____ (ii) _____

8. Who heads a clan?

9. Write K.C.C.A in full.

10. How is a gate keeper important at school?

11. What is the name of our country?

WEEK 3

Exercise 1

1. What is environment?

2. Give any two ways of caring for environment.

(i) _____

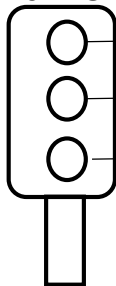
(ii) _____

3. Mention any two activities done by people that destroy environment

(i) _____

(ii) _____

4. **Name the traffic lights below.**



A

A

B

B

C

C

5. Which traffic light means **STOP**?

6. Name any two animals used for transport.

(i) _____ (ii) _____

7. How is a house important at home?

8. Give any three important places at school.

(i) _____

(ii) _____

(iii) _____

9. Give two uses of hills to people.

(i) _____

(ii) _____

10. Why do people go to market places?

Exercise 2

1. How many members make up the L.C committee?

2. Mention at least any three members of the L.C committee.

(i) _____ (ii) _____

(iii) _____

3. Who is responsible for children's affairs on the L.C committee?

4. What is fishing?

5. Mention any three types of fish caught in lakes and rivers of Uganda.

(i) _____ (ii) _____

(iii) _____

6. How do fishermen preserve fish for future use? (Give two ways)

(i) _____

(ii) _____

7. Give three methods/ways of catching fish.

(i) _____

(ii) _____

(iii) _____

8. What are social activities?

9. Give any three examples of social services in your sub-county.

(i) _____ (ii) _____

(iii) _____

10. Mention any two groups of people who provide social services in your area.

(i) _____ (ii) _____

Exercise 3

1. What are social service centres?

2. Mention any three examples of social service centres in our sub-county.

(i) _____ (ii) _____

(iii) _____

3. How is a drum important to people in our community?

4. **Draw the following means of communication.**

radio	telephone	drum	television

5. How is a radio useful at home?

6. Mention any three radio stations in Uganda.

(i) _____ (ii) _____

(iii) _____

7. Why do people read newspapers?

8. Mention any two examples of newspapers in Uganda.

(i) _____ (ii) _____

9. Which modern means of communication is used to send and receive money?

10. Mention any two telephone network companies in Uganda.

(i) _____ (ii) _____

Exercise 4

1. What is education?

2. Give two types of education in Uganda.

(i) _____ (ii) _____

3. Under which ministry are schools found in Uganda?

4. How is a zebra crossing important to pedestrians?

5. Who are pedestrians?

6. Mention any two causes of road accidents.

(i) _____

(ii) _____

7. Give two ways of controlling/preventing road accidents.

(i) _____

(ii) _____

8. Who is a causality?

9. Why do people give First aid?

10. Write down two types of houses.

(i) _____ (ii) _____

11. Mention any two materials used for building houses.

(i) _____ (ii) _____

12. How are road signs important to road users?

Exercise 5

1. What is a map?

2. Mention any three elements of a good map.

(i) _____





(ii) _____

(iii) _____

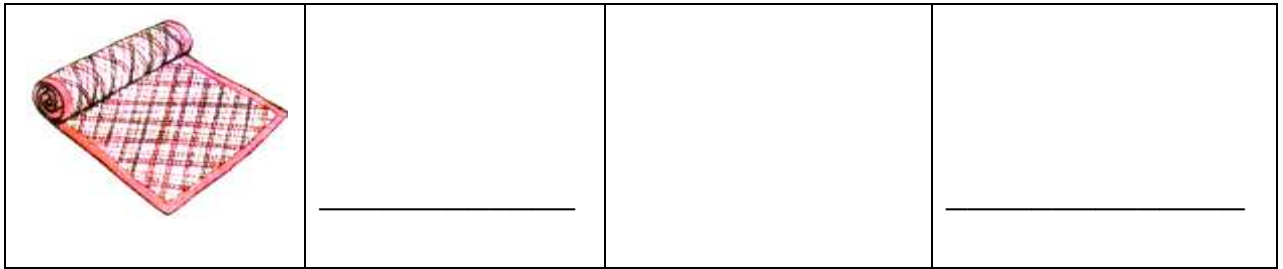
3. What is a picture?

4. How is a map similar to a picture?

5. **Draw the maps and pictures of the following objects.**

	_____		_____
	_____		_____





6. Which instrument is used to show direction of places?

7. List down the four cardinal points of a compass.

(i) _____ (ii) _____

(iii) _____ (iii) _____

8. Give any two groups of people who use a compass in their daily work.

(i) _____

(ii) _____

END