

MOTHERCARE PREPARATORY SCHOOLS
REVISION WORK – 2020
P.1 MATHEMATICS

Name: _____ Stream: _____

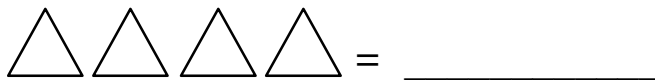
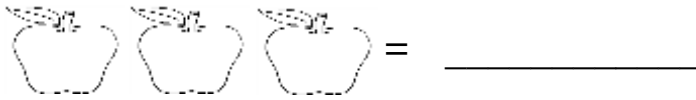
WEEK ONE

Exercise 1

1. Fill in the missing numbers.

0, 1, _____, 3, _____, 5, _____, 7, _____, 9, _____, _____, 12

2. Match correctly.



Exercise 2

1. Write the number name.

a) 1 = _____

b) 3 = _____

c) 8 = _____

d) 10 = _____

2. Read and match.

4	eighteen
6	nine
18	four
9	six

Exercise 3

1. Fill in the missing numbers.

11 , 12 , _____ , 14 , _____ , 16 , _____ , 18 , _____ , 20

2. Which number comes after?

4 , _____

17 , _____

24 , _____

seven , _____

ten , _____

3. Which number comes before?

_____ , 10

_____ , 27

_____ comes before thirteen

Exercise 4

1. Circle the smallest numbers

a) 4 , 9 , 3

b) 4 , 5 , 7

c) 12 , 10 , 13

d) 15 , 13 and 21

2. Underline the bigger / greater number.

7 or 8

16 and 17

Exercise 5

1. Arrange numbers from small to big.

a) 2 , 3 , 1 , 0 , 5 , 4 _____

b) 5 , 12 , 7 _____

c) 20 , 10 , 50 , 30 , 40 _____

2. Write these numbers in words.

9 = _____

12 = _____

20 = _____

14 = _____

WEEK TWO

Exercise 1

1. _____ is a collection of things.

2. Things found in a set are called? _____.
(books, elements, cups)

3. A set with no members is called an _____.

4. Name these sets.



A set of _____.



A set of _____.

Exercise 2

1. Read and draw.

a) A set of 3 books.



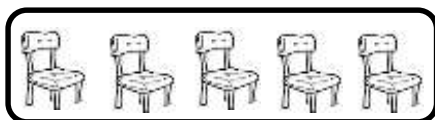

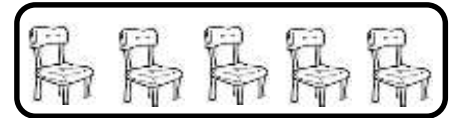

b) A set of 5 trees.



c) A set of 7 triangles.




2. Match the sets.

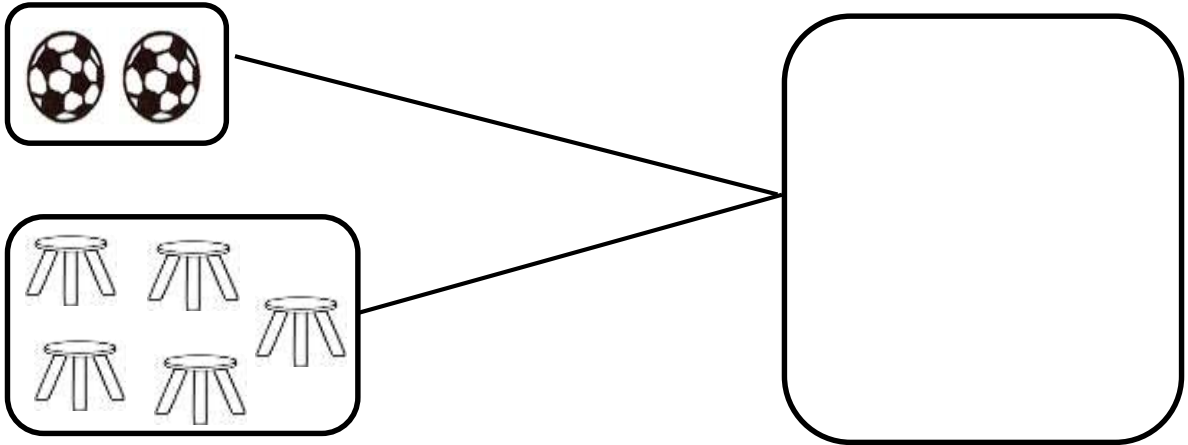


Exercise 3

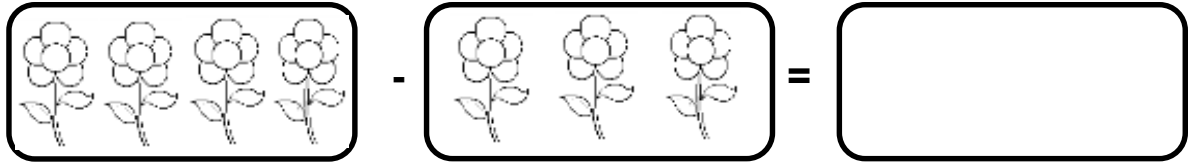
1. Join these sets.



2. Form a big set from small sets.




3. Separate these sets.



Exercise 4

1. Compare these sets using less / more.



a) Set **A** has _____ members.

b) Set **B** has _____ members.

c) How many members are in set **A**?

d) Set B has _____ members.

2. Add:

a) $1 + 2 =$ _____

b) $5 + 3 =$ _____

c)
$$\begin{array}{r} 3 \\ + 4 \\ \hline \\ \hline \end{array}$$

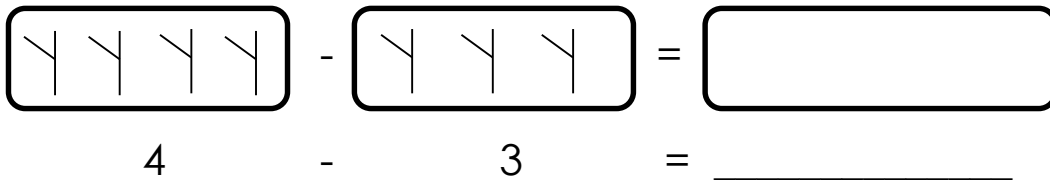
Exercise 5

1. Circle the bigger number.

30 , 20

12 , 21

2. Separate the sets given below.



4 - 3 = _____

3. 5 books + 3 books = _____

4. John has 2 goats. Jonah has 7 goats.
How many goats are they altogether?

WEEK THREE

Exercise 1

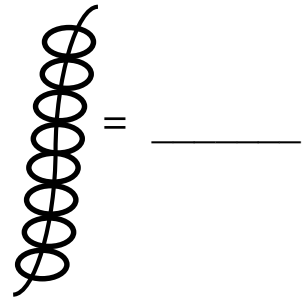
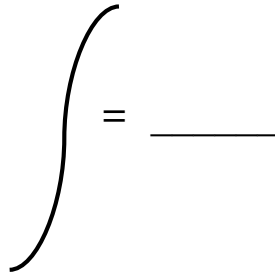
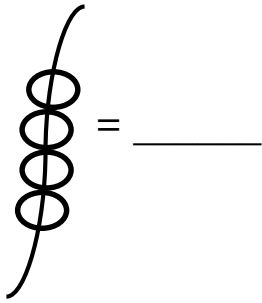
1. Read and answer correctly.

a) 4 plus 3 equals _____

b) 5 plus 4 gives us _____

c) Five plus two equals _____

2. Count and write.



3. Fill in tens and ones.

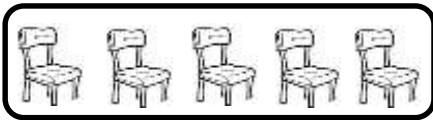
a) 32 = _____ tens _____ ones

b) 60 = _____ tens _____ ones



c) 7 = _____ tens _____ ones

Exercise 2

1. Name these sets.



2. Name these shapes.





Exercise 3

1. Work out;

a) $7 - 2 =$ _____

b) $14 - 9 =$ _____

c)

T	O
1	4
-	2

d)

T	O
7	6
-	4

2. Read and answer correctly.

a) A stool has 3 legs. How many legs have 2 stools?

b) Nine minus four equals _____.

c) Four times two equals _____.

d) Ten plus three equals _____.

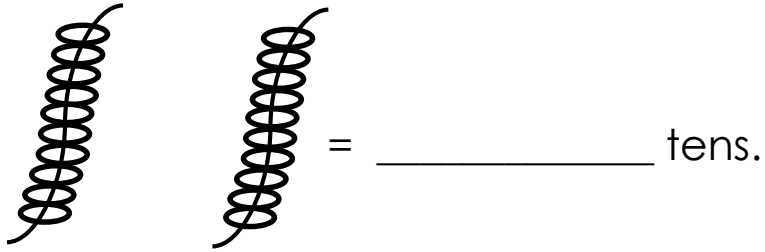
3. Circle the smaller number.

a) 3 or 10

b) 10 or 01

Exercise 4

1. Count tens and ones.



2. Expand;

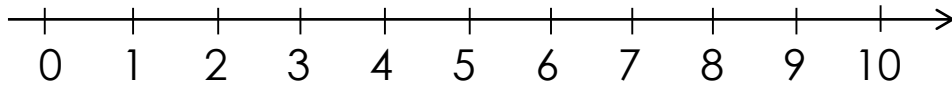
$$32 = \underline{\hspace{2cm}} + \underline{\hspace{2cm}}$$

$$40 = \underline{\hspace{2cm}} + \underline{\hspace{2cm}}$$

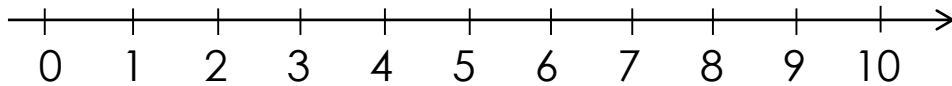
$$16 = \underline{\hspace{2cm}} + \underline{\hspace{2cm}}$$

3. Add using a numberline.

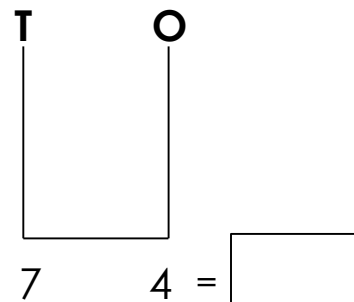
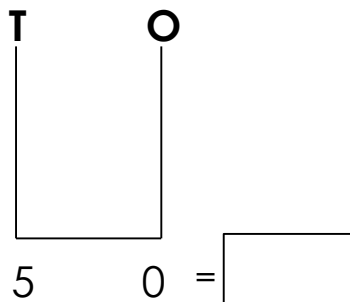
$$3 - 2 = \underline{\hspace{2cm}}$$



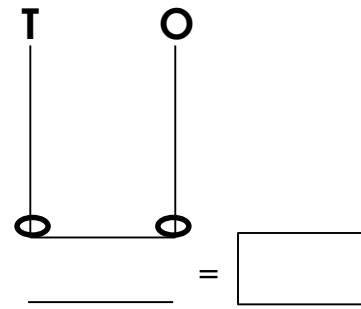
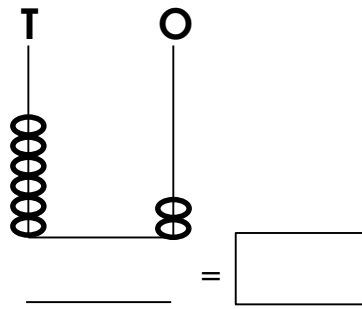
$$7 + 2 = \underline{\hspace{2cm}}$$



5. Draw rings on the abacus.



6. Find the numbers on the abacus.



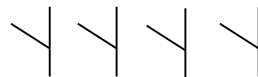
Exercise 5

1. Match words to pictures.

five



three



two



2. Fill in the missing tens and ones.

73 = _____ tens _____ ones.

18 = _____ tens _____ ones.

7 = _____ tens _____ ones.

3. Write the number between

0 , _____ , 2

7 , _____ , 9

10 , _____ , 12

13 , _____ , 15

20 , _____ , 22

43 , _____ , 45

-End-