

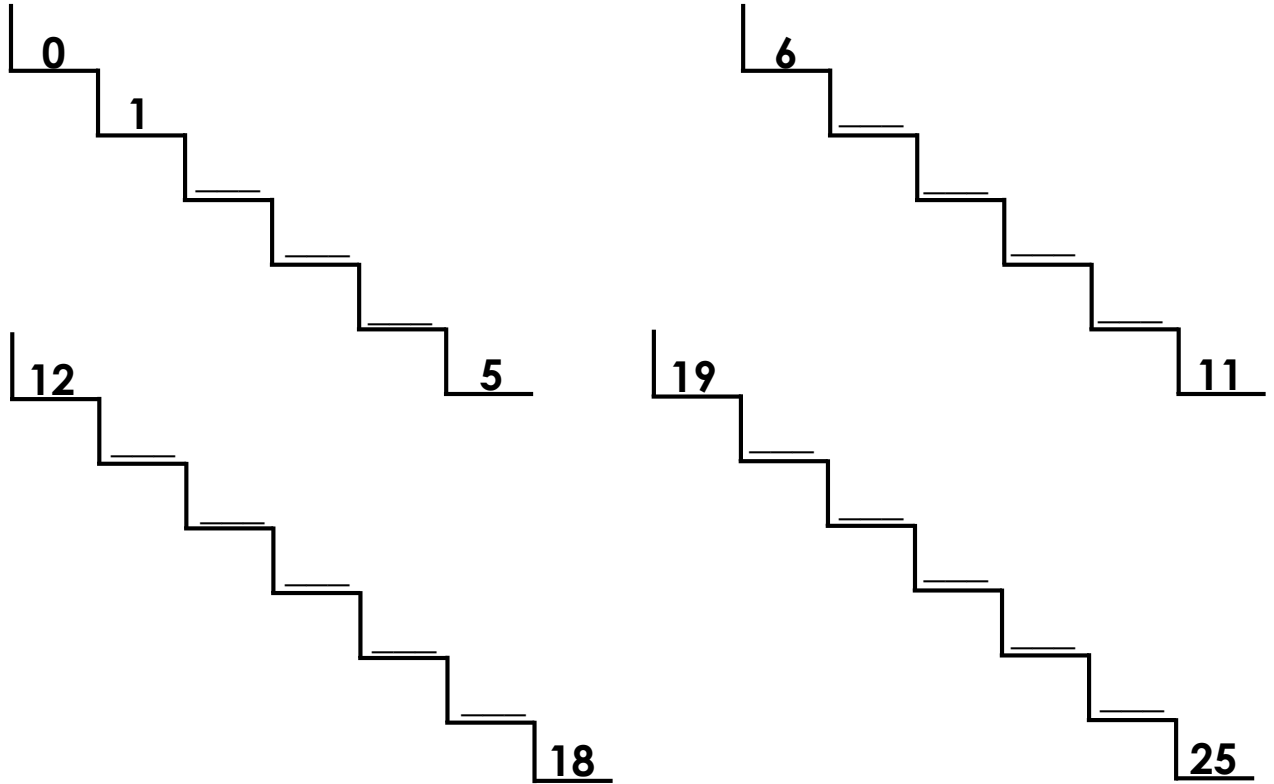
MOTHERCARE PREPARATORY SCHOOLS

TOP CLASS REVISION WORK - 2020

NUMERACY (LEARNING AREA 4)

Name: _____ Stream: _____

1. Fill the steps.



2. Count and write the number.

 <input type="text"/>	 <input type="text"/>	 <input type="text"/>	 <input type="text"/>	 <input type="text"/>
--------------------------	--------------------------	--------------------------	--------------------------	--------------------------

3. Shade for the number.

2 = 

6 = 

10 = 

3 = 

7 = 

0 = 

4. Add.

$3 + 2 =$

$7 + 2 =$

$10 + 2 =$

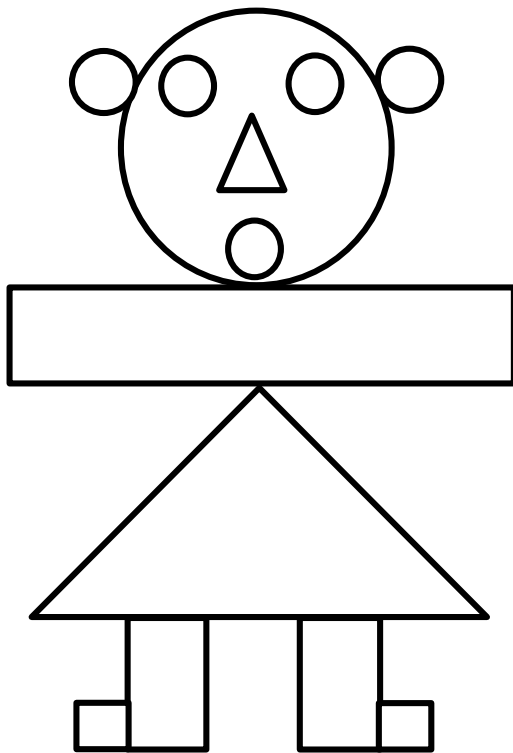
$8 + 0 =$

$2 + 1 =$

$4 + 4 =$

How many?

5.




○ circles _____

△ triangles _____

□ squares _____

▭ rectangles _____

6.



○ circles _____

△ triangles _____

□ squares _____

▭ rectangles _____

Oral

7. How many months make a year?
8. Mention the fifth (5) month of the year.
9. What shape does a nose have?
10. One plus one is equal to

-End-