

MOTHERCARE PREPARATORY SCHOOLS

P.4 SOCIAL STUDIES & R.E

Name: _____ Stream: _____

Branch: _____

SECTION A

1. State one element of a good map.

2. Name the safest place where people keep money.


3. How are games and sports useful at school?

4. In which district is your school located?

5. Name the compass direction opposite North East.

6. Write the first colour of the Uganda National flag.

7. How is the drawn map symbol useful to road users?



8. How did people of long ago travel from one place to another?

9. Name the tool used by people to tell time.

10. Mention any one local material used for making pots.

11. State any one way of locating places on a map.

12. Which school symbol helps a child to be identified?

13. Why is grass planted in compounds?

14. What term means the to massive cutting down of trees without replacing?

15. How are holidays useful to a school child?

16. Mention any one edible insect in your community.

17. How are nimbus clouds useful to a crop grower?

18. Name any one radio station in Uganda.

19. Give any one method of fishing.

20. Mention any one person who promotes security in our community.

21. Name the weather instrument which helps to measure the amount of rainfall received in an area.

22. In which way can child abuse be controlled in your area?

23. What is a family?


24. Mention the type of wood got from Eucalyptus trees.

25. State any one cause of road accidents in your district.

26. Name any one English newspaper published in Uganda.

27. How are markets useful to traders?

28. What does the drawn map symbol mean?

 _____

29. Give any one way of caring for domestic animals.

30. Name the place where wild animals are kept for public viewing.

31. How are dogs useful at home?

32. What is a project?

33. Write IGP in full.

34. How are donkeys useful to people in mountainous areas?

35. Mention any one product got from a cow.

For questions 36 – 40, answer either Christianity or Islamic questions but not both on a number.

36. **Either:** Where were Adam and Eve living before they disobeyed God?

Or : Where were Adam and Hawa living before they disobeyed Allah?

37. **Either:** Give any one reason why Christians pray to God.

Or : Give any one reason why Muslims pray to Allah.

38. Either: Why is Mountain Sinai important in Christianity?

Or : Why is Mountain Hira important in Islamic faith?

39. Either: Name one prophet who went to heaven alive.

Or : Name any one prophet in Islamic faith.

40. Either: Moses was chosen by God as a leader. Which group of people did Moses lead?

Or : Why is Musa remembered in Islam?

SECTION B

41. a) State any two ways of reducing road accidents in your area.

(I) _____

(II) _____

b) Name the following road safety signs.

(I)



(II)



42. a) What is environment?

b) Mention any two components of the environment.

(I) _____

(II) _____

c) State any one human activity that destroys the environment.

43. a) Name any two sources of water in your area.

(I) _____

(II) _____

b) Give any two ways of keeping water clean at home.

(I) _____

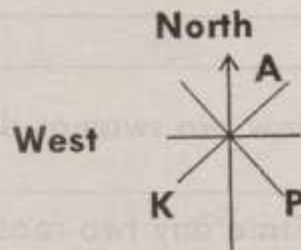
(II) _____

44. a) Name the points of a compass marked.

A _____

K _____

P _____



b) How is the above instrument useful to a pilot?

45. a) Give any two examples of basic needs of man.

(I) _____

(II) _____

b) State any two problems faced by people while providing basic needs.

(I) _____

(II) _____

46. a) Name any one river in Uganda.

b) State any two uses of rivers to people.

(I) _____

(II) _____

c) Name any one animal that lives in rivers.

47. a) Mention any two leaders at school.

(I) _____

(II) _____

b) Name the person who maintains security in a school.

c) Give any one role of a teacher at school.

48. a) What are swamps?

b) Give any two uses of swamps to people.

(I) _____

(II) _____

c) How are swamps dangerous to people around them?

49. a) State any two reasons why people carry out deforestation.

(I) _____

(II) _____

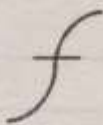
b) Give any two effects of deforestation to the environment.

(I) _____

(II) _____

50. a) Name the following map symbols.

(I)




(II)



(III)



(IV)



For questions 51 – 55, answer either Christianity or Islamic faith but not both on a number.

51. **Either:**

a) Give any one reason why God created Adam.

b) In which way was the creation of Adam different from that of other creatures?

c) How did Adam sin against God?

Or:

a) Give any one reason why Allah created Adam.

b) In which way was the creation of Adam different from that of other creatures?

c) How did Adam sin against Allah?

d) Who did Adam blame for his sin?

52. **Either:**

a) Name the holy book for Christians.

b) Mention any two books in the first part of the above mentioned book.

(I) _____

(II) _____

c) State the reason why Christians read the mentioned book in 52(a).

Or:

a) Name the holy book for Muslims.

b) Apart from the above book, name two holy books in Islam.

(I) _____

(II) _____

c) State the reason why Muslims read the mentioned book in 52(a).

53. **Either:**

a) What is a prayer?

b) State any two reasons why Christians pray.

(I) _____

(II) _____

c) Mention any one request made in the Lord's Prayer.

Or:

a) What is a prayer?

b) State any two reasons why Muslims pray.

(I) _____

(II) _____

c) Name the early Morning Prayer said by Muslims daily.

54. **Either:**

a) Write short sentences on each of the following days:-

(I) Good Friday : _____

(II) Palm Sunday : _____

(III) Ash Wednesday: _____

(IV) Christmas day: _____

Or:

a) Write short sentences on each of the following days:-

(I) Idd-El-Fitri : _____

(II) Idd- Aduha : _____

b) Give the duties of the following people in Islam.

(I) Imam : _____

(II) Muezzin : _____

55. **FOR BOTH:**

a) State any two similarities between Muslims and Christians.

(I) _____

(II) _____

b) Give any two differences between Muslims and Christians.

(I) _____

(II) _____

****THE END****