

MOTHERCARE PREPARATORY SCHOOLS

PRIMARY SIX SOCIAL STUDIES

Name: _____ Stream: _____

Branch: _____

SECTION A

1. John was going to school in the morning. He saw his shadow on his right hand side. To which direction was he facing?

2. Write down one importance of a rain gauge at a weather station.

3. Give one problem Uganda is facing as a landlocked country.

4. Why is a barometer kept in a Stevenson screen?

5. Why did traders during the Long Distance trade travel in caravans?

6. How are Longitudes important to map readers?

7. State the importance of planting grass in the school compound.

8. How did Dr. Albert Cook promote health services in Uganda?

9. Give one landlocked country that neighbours Uganda.

10. What is climate?

11. State the reason why trees in Equatorial regions grow tall.

12. Name the European explorer who tried to find the source of R. Nile from its mouth.

13. Write down one founder member president of East African Community.

14. How are co-curricular activities important to pupils?

15. What is Equinox?

16. Why was the crested crane chosen to be Uganda's National Emblem?

17. How is R. Kagera politically important to Uganda and Rwanda?

18. Under which ministry is the Uganda Police force?

19. Who heads all civil servants in a ministry?

20. Why does a person travelling from Kampala to Jinja by air take a shorter distance than the one that uses road transport?

21. What does the black colour represent on Uganda flag?

22. How does Lake Victoria promote trade among East African countries?

23. Why is the Stevenson screen built with louvres?

24. State one reason why Islamic religion took long to spread in Uganda.

25. Why should school children put on uniform?

26. Give one human activity that affects the climate of an area negatively.

27. Write the original inhabitants of Uganda before the coming of the Bantu.

28. Give any one tribe in Uganda under the Bantu people in Uganda.


29. How can the government of Uganda help to reduce the problem of Rural-urban migration?

30. What is a bill?

31. Give one contribution of Dr. Apollo Milton Obote towards the Uganda's Independence.

32. Write down one reason why people clear swamps today.

33. Draw a map symbol of a dam in the space below.



34. Name the main cash crop used in making of sugar.

35. Give the evidence that shows Lake Victoria is on a higher altitude than Lake Kyoga.

In questions 36-40, answer "either" or "Or" but not "BOTH".
No mark will be awarded to one who attempts both Questions.

36. **Either:**
Why did Jesus Christ come on earth?

Or:
Who is the last prophet according to Islam?

37. **Either:**
What is a church?

Or:
What is Islam?

38. **Either:**
Give the major reason why Christians close their eyes during prayers.

Or:
Give one reason why women and men are always separated during prayers.

39. **Either:**
Define lent.

Or:
Define Ramathan.

40. **Either:**
Why do Christians visit Namugongo every year on 3rd June?

Or:

SECTION B

41.a) Give any two positive contributions of missionaries in East Africa.

(i) _____

(ii) _____

b) Write down two negative contribution of missionary work in East Africa.

(i) _____

(ii) _____

42.a) What are economic activities?

b) Write any two economic activities done in Uganda.

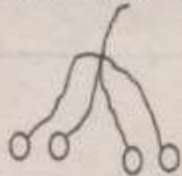
(i) _____

(ii) _____

c) Give any one problem facing people as they do different economic activities

43.a) Give one way stone age sites are important to the government of Uganda.

b) How was the tool below important to early man?



c) Why did early man live around lakes and rivers?

d) Give one lesson you learn from the legend of Gipiir and Labongo.

44. Study a map of Uganda below and answer the questions about it.



a) Name the tributary of R. Nile marked **N**.

b) Which European explorer named mountain **M** "Mountain of the moon"?

c) State the reason why Lake **S** is very swampy.

d) Use a ruler and draw Equator on the map above.

45.a) Match A with B.

- | A | B |
|-------------------------|--|
| (i) Grace Ibingira | - raised the Uganda National Flag on 9th October 1962. |
| (ii) Benidicto Kiwanuka | - designed the Uganda National Flag. |
| (iii) Kanuti Akorimo | - was the last British governor of Uganda. |
| (iv) Sin Walter Coutts | - led Uganda during self rule. |

Correct order

(i) Grace Ibingira _____

46.a) Write down the main duty of the speaker in the parliament.

b) Who heads the legislature in Uganda?

c) State one duty of legislature.

d) Apart from the legislature, mention any one organ of the government in Uganda.

47.a) What is child abuse?


b) Give one cause of child abuse.

c) Write down one group of people who abuse children's rights.

d) State one way children misuse their rights.

48.a) Why should people budget before spending money?

b) Draw the type of budget which is most suitable for a family in the space below.



d) Which ministry is responsible for preparing the National budget?

49.a) Give one reason why slaves were needed during Long distance trade.

b) What was the major inland slave trade market in East Africa?

c) Write down one reason why some African chiefs and kings never wanted slave trade to stop.

d) How did slave trade lead to famine in East Africa?

50.a) What is democracy?

b) Give two ways how democracy is practiced in Uganda today.

(i) _____

(ii) _____

c) What is a by-election?

In questions 50-55, answer "Either" or "Or" but not "BOTH".

51. **Either:**

a) Give two reasons why Jesus performed miracles.

(i) _____

(ii) _____

b) Mention two miracles performed by Jesus Christ.

b) Mention two miracles performed by Prophet Muhammad.

(i) _____

(ii) _____

52. **Either:**

a) What is a prayer?

b) Why should Christians humble themselves while praying?

c) Point out any two reasons why Christians should pray.

(i) _____

(ii) _____

Or:

a) What is Salat?

b) List down any three conditions fulfilled before performing a prayer.

(i) _____

(ii) _____

(iii) _____

53. **Either:**

a) How were the magi able to find the place of birth of baby Jesus?

b) State two gifts which the magi gave baby Jesus.

(i) _____

(ii) _____

b) How were the following related to Prophet Muhammad?

(i) Aminah: _____

(ii) Khadijah: _____

(iii) Abudallah: _____

54. **Either:**

a) Why are the following important in Christianity?

(i) Good Friday _____

(ii) Palm Sunday _____

(iii) Pentecost _____

(iv) Ash Wednesday _____

Or:

a) Why should a Muslim fast?

b) Write down three categories of people who are excused from fasting in the holy month of Ramathan.

(i) _____

(ii) _____

(iii) _____

55. **For both.**

a) Which religion was in Uganda before the coming of foreigners?

b) Name the first foreign religion to be introduced in Uganda.

Islam and Christianity in Uganda has led to