

MOTHELCARE PREPARATORY SCHOOLS

PRIMARY THREE LITERACY 1A (SCIENCE)

Name: _____ Stream: _____

SECTION A

1. Give one example of a wild animal in our sub county.

2. Name the main natural source of water.

3. Write one way soil is formed.

4. What scientific name is given to the study of living things and non-living things?

5. Mention one member of a family.

6. Name the item made from clay shown below.



7. Give one reason why animals move.

8. What is soil?

9. In which season is harvesting done?

10. Give one example of a permanent house.

11. Name one health habit done at home.

12. Mention the body part used for feeling.

- 13. How can we keep water sources clean?

- 14. Name any one product we get from a cow.

- 15. How many legs does a housefly have?

- 16. Mention one type of soil?

- 17. Write one cause of accidents on roads.

- 18. What do we call a mixture of gases?

- 19. Name one animal that lives in soil.

- 20. State one symbol of a school.

- 21. What name is given to a family where we find father mother and their biological children?

- 22. Give one use of the sun to people.

- 23. How does a chameleon protect itself from danger?

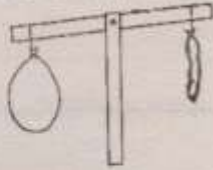
- 24. Why do we wash fruits before eating them?

- 25. What are natural changes?

- 26. Mention the type of soil which has the biggest soil particles.

28. What is soil erosion?

27. Name the property of air shown below.



29. Name one component of air.

30. State one use of water at home.

31. What are domestic birds?

32. Mention one product got from cows.

33. What name is given to the vertical arrangement of soil layers?

34. Name one thing used by people to manage rainy weather.

35. Write one characteristic of living things.

36. Name the garden tool shown below.



37. Give one source of water.

38. Name the highest clouds in the sky?

39. Mention one element of weather.

40. State one property of air.

SECTION B


41.a) Name one component of soil.

b) Name the three types of soil.

(i) _____ (ii) _____

(iii) _____

42. Use the diagram below to answer the questions that follow.



a) Name the parts marked A, B and C.

(i) A _____ (ii) B _____

(iii) C _____

b) Give one example of an edible insect.

43. Match animals to their type of movement.

snake	walking
fish	hopping
frog	swimming
man	gliding

snake _____

fish _____

frog _____

man _____

44.a) Name two products got from birds.

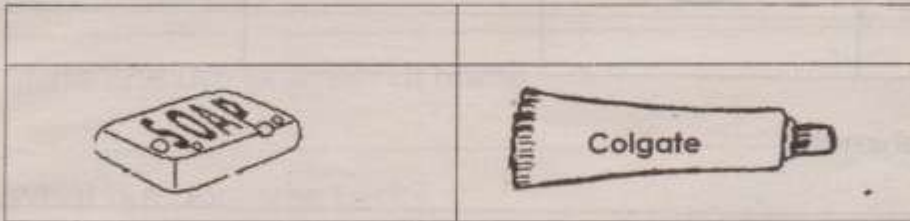
(i) _____ (ii) _____

b) Mention two examples of domestic birds.

(i) _____ (ii) _____

45.a) What is personal hygiene?

b) Name these items used to clean our body.



c) Why do you bathe regularly?

46. Complete the following.

(i) Mixture of gases _____

(ii) Component of air that covers 78% _____

(iii) Component of air found in sodas _____

(iv) Part of air used for burning _____

47.a) Name two things moved by wind.

(i) _____ (ii) _____

b) Write two dangers of strong wind in the environment.

(i) _____

(ii) _____

48.a) Mention one component of air.

b) Name three uses of wind.

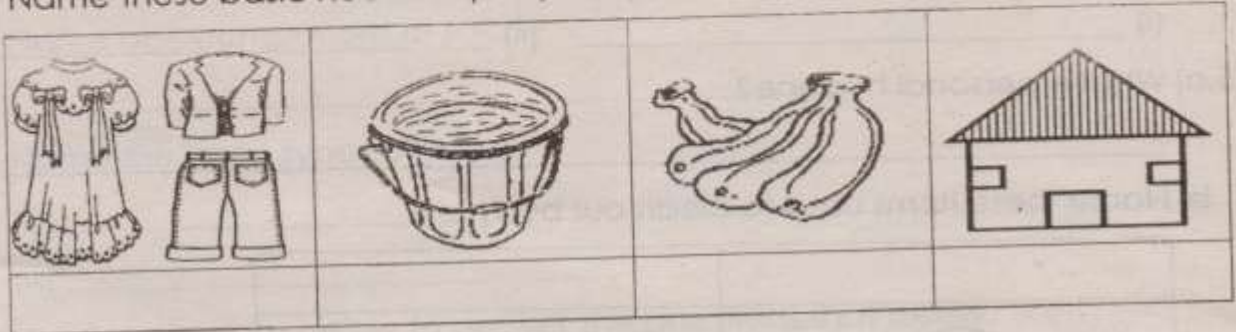
(i) _____

(ii) _____

(iii) _____

49.a) Name the basic needs of people below.

b) Name these basic needs of people.



50.a) What are wild animals?

b) Mention three examples of wild animals.

(i) _____ (ii) _____

(iii) _____

51.a) Mention two uses of water in our community.

(i) _____

(ii) _____

b) Name two sources of water in our community.

(i) _____ (ii) _____

52.a) Name the main natural source of heat and light in our environment.

b) Mention two uses of the sun to people.

(i) _____

(ii) _____

c) State one danger of too much sunshine.

53.a) How are shadows formed?

b) Draw the shadow of the object shown below.



c) Give two uses of shadows to people.

(i) _____

(ii) _____

54.a) What are human activities?

b) Name these human activities shown below.



55.a) What are living things?

b) Mention one group of living things.

c) Give two examples of non living things.

(i) _____ (ii) _____

-End-